

# Making Change (A)

Calculate how much change is required for each transaction.

	<u>Cost of Items</u>	<u>Amount Paid</u>	<u>Change Required</u>
1.	\$3.41	 \$5.00	
2.	\$1.29	 \$5.00	
3.	\$2.62	 \$5.00	
4.	\$2.54	 \$5.00	
5.	\$0.04	 \$5.00	

Images used with the permission of the Bank of Canada.

# Making Change (A) Answers

Calculate how much change is required for each transaction.

	<u>Cost of Items</u>	<u>Amount Paid</u>	<u>Change Required</u>
1.	\$3.41	 \$5.00	\$1.59
2.	\$1.29	 \$5.00	\$3.71
3.	\$2.62	 \$5.00	\$2.38
4.	\$2.54	 \$5.00	\$2.46
5.	\$0.04	 \$5.00	\$4.96

Images used with the permission of the Bank of Canada.

# Making Change (B)

Calculate how much change is required for each transaction.

Cost of Items

Amount Paid

Change Required

1. \$3.69



\$5.00

2. \$4.34



\$5.00

3. \$2.17



\$5.00

4. \$3.26



\$5.00

5. \$4.52



\$5.00

Images used with the permission of the Bank of Canada.

## Making Change (B) Answers

Calculate how much change is required for each transaction.

	<u>Cost of Items</u>	<u>Amount Paid</u>	<u>Change Required</u>
1.	\$3.69	 \$5.00	\$1.31
2.	\$4.34	 \$5.00	\$0.66
3.	\$2.17	 \$5.00	\$2.83
4.	\$3.26	 \$5.00	\$1.74
5.	\$4.52	 \$5.00	\$0.48

Images used with the permission of the Bank of Canada.

# Making Change (C)

Calculate how much change is required for each transaction.

Cost of Items

Amount Paid

Change Required

1. \$4.49



\$5.00

2. \$2.89



\$5.00

3. \$2.09



\$5.00

4. \$0.15



\$5.00

5. \$1.39



\$5.00

Images used with the permission of the Bank of Canada.



# Making Change (C) Answers

Calculate how much change is required for each transaction.

	<u>Cost of Items</u>	<u>Amount Paid</u>	<u>Change Required</u>
1.	\$4.49	 \$5.00	\$0.51
2.	\$2.89	 \$5.00	\$2.11
3.	\$2.09	 \$5.00	\$2.91
4.	\$0.15	 \$5.00	\$4.85
5.	\$1.39	 \$5.00	\$3.61

Images used with the permission of the Bank of Canada.

# Making Change (D)

Calculate how much change is required for each transaction.

Cost of Items

Amount Paid

Change Required

1. \$2.33



\$5.00

2. \$2.87



\$5.00

3. \$2.85



\$5.00

4. \$3.90



\$5.00

5. \$0.53



\$5.00

Images used with the permission of the Bank of Canada.

# Making Change (D) Answers

Calculate how much change is required for each transaction.

	<u>Cost of Items</u>	<u>Amount Paid</u>	<u>Change Required</u>
1.	\$2.33	 \$5.00	\$2.67
2.	\$2.87	 \$5.00	\$2.13
3.	\$2.85	 \$5.00	\$2.15
4.	\$3.90	 \$5.00	\$1.10
5.	\$0.53	 \$5.00	\$4.47

Images used with the permission of the Bank of Canada.



# Making Change (E)

Calculate how much change is required for each transaction.

Cost of Items

Amount Paid

Change Required

1. \$3.10



\$5.00

2. \$1.71



\$5.00

3. \$0.04



\$5.00

4. \$1.50



\$5.00

5. \$4.06








\$5.00

Images used with the permission of the Bank of Canada.

# Making Change (E) Answers

Calculate how much change is required for each transaction.

	<u>Cost of Items</u>	<u>Amount Paid</u>	<u>Change Required</u>
1.	\$3.10	 \$5.00	\$1.90
2.	\$1.71	 \$5.00	\$3.29
3.	\$0.04	 \$5.00	\$4.96
4.	\$1.50	 \$5.00	\$3.50
5.	\$4.06	 \$5.00	\$0.94

Images used with the permission of the Bank of Canada.

# Making Change (F)

Calculate how much change is required for each transaction.

Cost of Items

Amount Paid

Change Required

1. \$1.92



\$5.00

2. \$0.85



\$5.00

3. \$1.45



\$5.00

4. \$4.86



\$5.00

5. \$3.79



\$5.00

Images used with the permission of the Bank of Canada.

# Making Change (F) Answers

Calculate how much change is required for each transaction.

	<u>Cost of Items</u>	<u>Amount Paid</u>	<u>Change Required</u>
1.	\$1.92	 \$5.00	\$3.08
2.	\$0.85	 \$5.00	\$4.15
3.	\$1.45	 \$5.00	\$3.55
4.	\$4.86	 \$5.00	\$0.14
5.	\$3.79	 \$5.00	\$1.21

Images used with the permission of the Bank of Canada.

# Making Change (G)

Calculate how much change is required for each transaction.

Cost of Items

Amount Paid

Change Required

1. \$1.47



\$5.00

2. \$2.02



\$5.00

3. \$2.59



\$5.00

4. \$4.62



\$5.00

5. \$0.95



\$5.00

Images used with the permission of the Bank of Canada.



# Making Change (G) Answers

Calculate how much change is required for each transaction.

	<u>Cost of Items</u>	<u>Amount Paid</u>	<u>Change Required</u>
1.	\$1.47	 \$5.00	\$3.53
2.	\$2.02	 \$5.00	\$2.98
3.	\$2.59	 \$5.00	\$2.41
4.	\$4.62	 \$5.00	\$0.38
5.	\$0.95	 \$5.00	\$4.05

Images used with the permission of the Bank of Canada.

# Making Change (H)

Calculate how much change is required for each transaction.

Cost of Items

Amount Paid

Change Required

1. \$4.51



\$5.00

2. \$1.67



\$5.00

3. \$2.83



\$5.00

4. \$4.64



\$5.00

5. \$2.35



\$5.00

Images used with the permission of the Bank of Canada.

# Making Change (H) Answers

Calculate how much change is required for each transaction.

	<u>Cost of Items</u>	<u>Amount Paid</u>	<u>Change Required</u>
1.	\$4.51	 \$5.00	\$0.49
2.	\$1.67	 \$5.00	\$3.33
3.	\$2.83	 \$5.00	\$2.17
4.	\$4.64	 \$5.00	\$0.36
5.	\$2.35	 \$5.00	\$2.65

Images used with the permission of the Bank of Canada.

# Making Change (I)

Calculate how much change is required for each transaction.

Cost of Items

Amount Paid

Change Required

1. \$4.17



\$5.00

2. \$1.15



\$5.00

3. \$1.21



\$5.00

4. \$0.81



\$5.00

5. \$4.97



\$5.00

Images used with the permission of the Bank of Canada.

# Making Change (I) Answers

Calculate how much change is required for each transaction.

	<u>Cost of Items</u>	<u>Amount Paid</u>	<u>Change Required</u>
1.	\$4.17	 \$5.00	\$0.83
2.	\$1.15	 \$5.00	\$3.85
3.	\$1.21	 \$5.00	\$3.79
4.	\$0.81	 \$5.00	\$4.19
5.	\$4.97	 \$5.00	\$0.03

Images used with the permission of the Bank of Canada.



# Making Change (J)

Calculate how much change is required for each transaction.

Cost of Items

Amount Paid

Change Required

1. \$4.11



\$5.00

2. \$4.97



\$5.00

3. \$3.84



\$5.00

4. \$0.09



\$5.00

5. \$2.96



\$5.00

Images used with the permission of the Bank of Canada.

# Making Change (J) Answers

Calculate how much change is required for each transaction.

	<u>Cost of Items</u>	<u>Amount Paid</u>	<u>Change Required</u>
1.	\$4.11	 \$5.00	\$0.89
2.	\$4.97	 \$5.00	\$0.03
3.	\$3.84	 \$5.00	\$1.16
4.	\$0.09	 \$5.00	\$4.91
5.	\$2.96	 \$5.00	\$2.04

Images used with the permission of the Bank of Canada.