

Making Change (A)

Calculate how much change is required for each transaction.

Cost of Items

Amount Paid

Change Required

1. \$1.19



\$10.00

2. \$3.32



\$10.00

3. \$1.82



\$10.00

4. \$1.54



\$10.00

5. \$7.39






\$10.00

Images used with the permission of the Bank of Canada.

Making Change (A) Answers

Calculate how much change is required for each transaction.

	<u>Cost of Items</u>	<u>Amount Paid</u>	<u>Change Required</u>
1.	\$1.19	 \$10.00	\$8.81
2.	\$3.32	 \$10.00	\$6.68
3.	\$1.82	 \$10.00	\$8.18
4.	\$1.54	 \$10.00	\$8.46
5.	\$7.39	 \$10.00	\$2.61

Images used with the permission of the Bank of Canada.