

Making Change (B)

Calculate how much change is required for each transaction.

Cost of Items

Amount Paid

Change Required

1. \$0.81



\$10.00

2. \$3.00



\$10.00

3. \$1.33



\$10.00

4. \$8.16



\$10.00

5. \$3.50








\$10.00

Images used with the permission of the Bank of Canada.

Making Change (B) Answers

Calculate how much change is required for each transaction.

| | <u>Cost of Items</u> | <u>Amount Paid</u> | <u>Change Required</u> |
|----|----------------------|---|------------------------|
| 1. | \$0.81 |  \$10.00 | \$9.19 |
| 2. | \$3.00 |  \$10.00 | \$7.00 |
| 3. | \$1.33 |  \$10.00 | \$8.67 |
| 4. | \$8.16 |  \$10.00 | \$1.84 |
| 5. | \$3.50 |  \$10.00 | \$6.50 |

Images used with the permission of the Bank of Canada.