

Making Change (I)

Calculate how much change is required for each transaction.

Cost of Items

Amount Paid

Change Required

1. \$5.18



\$10.00

2. \$9.15



\$10.00

3. \$9.61



\$10.00

4. \$2.14



\$10.00

5. \$1.81








\$10.00

Images used with the permission of the Bank of Canada.

Making Change (I) Answers

Calculate how much change is required for each transaction.

	<u>Cost of Items</u>	<u>Amount Paid</u>	<u>Change Required</u>
1.	\$5.18	 \$10.00	\$4.82
2.	\$9.15	 \$10.00	\$0.85
3.	\$9.61	 \$10.00	\$0.39
4.	\$2.14	 \$10.00	\$7.86
5.	\$1.81	 \$10.00	\$8.19

Images used with the permission of the Bank of Canada.