

# Making Change (A)

Calculate how much change is required for each transaction.

Cost of Items

Amount Paid

Change Required

1. \$1.71



\$20.00

2. \$0.39



\$20.00

3. \$10.55



\$20.00

4. \$2.02



\$20.00

5. \$19.60








\$20.00

Images used with the permission of the Bank of Canada.

# Making Change (A) Answers

Calculate how much change is required for each transaction.

	<u>Cost of Items</u>	<u>Amount Paid</u>	<u>Change Required</u>
1.	\$1.71	 \$20.00	\$18.29
2.	\$0.39	 \$20.00	\$19.61
3.	\$10.55	 \$20.00	\$9.45
4.	\$2.02	 \$20.00	\$17.98
5.	\$19.60	 \$20.00	\$0.40

Images used with the permission of the Bank of Canada.