

Making Change (B)

Calculate how much change is required for each transaction.

Cost of Items

Amount Paid

Change Required

1. \$2.92



\$20.00

2. \$4.77



\$20.00

3. \$13.85



\$20.00

4. \$7.48



\$20.00

5. \$6.97








\$20.00

Images used with the permission of the Bank of Canada.

Making Change (B) Answers

Calculate how much change is required for each transaction.

	<u>Cost of Items</u>	<u>Amount Paid</u>	<u>Change Required</u>
1.	\$2.92	 \$20.00	\$17.08
2.	\$4.77	 \$20.00	\$15.23
3.	\$13.85	 \$20.00	\$6.15
4.	\$7.48	 \$20.00	\$12.52
5.	\$6.97	 \$20.00	\$13.03

Images used with the permission of the Bank of Canada.