

# Making Change (I)

Calculate how much change is required for each transaction.

Cost of Items

Amount Paid

Change Required

1. \$16.08



\$20.00

2. \$10.78



\$20.00

3. \$12.23



\$20.00

4. \$15.64



\$20.00

5. \$5.02








\$20.00

Images used with the permission of the Bank of Canada.

# Making Change (I) Answers

Calculate how much change is required for each transaction.

<u>Cost of Items</u>	<u>Amount Paid</u>	<u>Change Required</u>
1. \$16.08	 \$20.00	\$3.92
2. \$10.78	 \$20.00	\$9.22
3. \$12.23	 \$20.00	\$7.77
4. \$15.64	 \$20.00	\$4.36
5. \$5.02	 \$20.00	\$14.98

Images used with the permission of the Bank of Canada.