

## Making Change (B)

Calculate how much change is required for each transaction.

Cost of Items

Amount Paid

Change Required

1. \$2.05



\$50.00

2. \$27.93



\$50.00

3. \$20.52



\$50.00

4. \$32.69



\$50.00

5. \$25.36








\$50.00

Images used with the permission of the Bank of Canada.

# Making Change (B) Answers

Calculate how much change is required for each transaction.

	<u>Cost of Items</u>	<u>Amount Paid</u>	<u>Change Required</u>
1.	\$2.05	 \$50.00	\$47.95
2.	\$27.93	 \$50.00	\$22.07
3.	\$20.52	 \$50.00	\$29.48
4.	\$32.69	 \$50.00	\$17.31
5.	\$25.36	 \$50.00	\$24.64

Images used with the permission of the Bank of Canada.