

Making Change (C)

Calculate how much change is required for each transaction.

Cost of Items

Amount Paid


Change Required

1. \$7.31



\$100.00

2. \$34.04



\$100.00

3. \$30.69



\$100.00

4. \$77.18



\$100.00

5. \$83.36








\$100.00

Images used with the permission of the Bank of Canada.

Making Change (C) Answers

Calculate how much change is required for each transaction.

| | <u>Cost of Items</u> | <u>Amount Paid</u> | <u>Change Required</u> |
|----|----------------------|--|------------------------|
| 1. | \$7.31 |  \$100.00 | \$92.69 |
| 2. | \$34.04 |  \$100.00 | \$65.96 |
| 3. | \$30.69 |  \$100.00 | \$69.31 |
| 4. | \$77.18 |  \$100.00 | \$22.82 |
| 5. | \$83.36 |  \$100.00 | \$16.64 |

Images used with the permission of the Bank of Canada.