

Making Change (F)

Calculate how much change is required for each transaction.

Cost of Items

Amount Paid


Change Required

1. \$27.45



\$100.00

2. \$45.87



\$100.00

3. \$65.14



\$100.00

4. \$16.19



\$100.00

5. \$65.00








\$100.00

Images used with the permission of the Bank of Canada.

Making Change (F) Answers

Calculate how much change is required for each transaction.

<u>Cost of Items</u>	<u>Amount Paid</u>	<u>Change Required</u>
1. \$27.45	 \$100.00	\$72.55
2. \$45.87	 \$100.00	\$54.13
3. \$65.14	 \$100.00	\$34.86
4. \$16.19	 \$100.00	\$83.81
5. \$65.00	 \$100.00	\$35.00

Images used with the permission of the Bank of Canada.