

Making Change (A)

Calculate how much change is required for each transaction.

Cost of Items

Amount Paid

Change Required

1. \$96.10



\$100.00

2. \$22.03



\$100.00

3. \$41.05



\$100.00

4. \$58.32



\$100.00

5. \$28.69








\$100.00

Images used with the permission of the Bank of Canada.

Making Change (A) Answers

Calculate how much change is required for each transaction.

<u>Cost of Items</u>	<u>Amount Paid</u>	<u>Change Required</u>
1. \$96.10	 \$100.00	\$3.90
2. \$22.03	 \$100.00	\$77.97
3. \$41.05	 \$100.00	\$58.95
4. \$58.32	 \$100.00	\$41.68
5. \$28.69	 \$100.00	\$71.31

Images used with the permission of the Bank of Canada.

Making Change (B)

Calculate how much change is required for each transaction.

Cost of Items

Amount Paid

Change Required

1. \$10.39



\$100.00

2. \$39.71



\$100.00

3. \$91.92



\$100.00

4. \$0.25



\$100.00

5. \$3.80








\$100.00

Images used with the permission of the Bank of Canada.

Making Change (B) Answers

Calculate how much change is required for each transaction.

<u>Cost of Items</u>	<u>Amount Paid</u>	<u>Change Required</u>
1. \$10.39	 \$100.00	\$89.61
2. \$39.71	 \$100.00	\$60.29
3. \$91.92	 \$100.00	\$8.08
4. \$0.25	 \$100.00	\$99.75
5. \$3.80	 \$100.00	\$96.20

Images used with the permission of the Bank of Canada.

Making Change (C)

Calculate how much change is required for each transaction.

Cost of Items

Amount Paid

Change Required

1. \$7.31



\$100.00

2. \$34.04



\$100.00

3. \$30.69



\$100.00

4. \$77.18



\$100.00

5. \$83.36








\$100.00

Images used with the permission of the Bank of Canada.

Making Change (C) Answers

Calculate how much change is required for each transaction.

	<u>Cost of Items</u>	<u>Amount Paid</u>	<u>Change Required</u>
1.	\$7.31	 \$100.00	\$92.69
2.	\$34.04	 \$100.00	\$65.96
3.	\$30.69	 \$100.00	\$69.31
4.	\$77.18	 \$100.00	\$22.82
5.	\$83.36	 \$100.00	\$16.64

Images used with the permission of the Bank of Canada.

Making Change (D)

Calculate how much change is required for each transaction.

Cost of Items

Amount Paid

Change Required

1. \$1.09



\$100.00

2. \$1.46



\$100.00

3. \$20.25



\$100.00

4. \$95.38



\$100.00

5. \$29.38








\$100.00

Images used with the permission of the Bank of Canada.

Making Change (D) Answers

Calculate how much change is required for each transaction.

	<u>Cost of Items</u>	<u>Amount Paid</u>	<u>Change Required</u>
1.	\$1.09	 \$100.00	\$98.91
2.	\$1.46	 \$100.00	\$98.54
3.	\$20.25	 \$100.00	\$79.75
4.	\$95.38	 \$100.00	\$4.62
5.	\$29.38	 \$100.00	\$70.62

Images used with the permission of the Bank of Canada.

Making Change (E)

Calculate how much change is required for each transaction.

Cost of Items

Amount Paid

Change Required

1. \$23.09



\$100.00

2. \$48.99



\$100.00

3. \$10.96



\$100.00

4. \$16.17



\$100.00

5. \$83.65








\$100.00

Images used with the permission of the Bank of Canada.

Making Change (E) Answers

Calculate how much change is required for each transaction.

<u>Cost of Items</u>	<u>Amount Paid</u>	<u>Change Required</u>
1. \$23.09	 \$100.00	\$76.91
2. \$48.99	 \$100.00	\$51.01
3. \$10.96	 \$100.00	\$89.04
4. \$16.17	 \$100.00	\$83.83
5. \$83.65	 \$100.00	\$16.35

Images used with the permission of the Bank of Canada.

Making Change (F)

Calculate how much change is required for each transaction.

Cost of Items

Amount Paid

Change Required

1. \$27.45



\$100.00

2. \$45.87



\$100.00

3. \$65.14



\$100.00

4. \$16.19



\$100.00

5. \$65.00








\$100.00

Images used with the permission of the Bank of Canada.

Making Change (F) Answers

Calculate how much change is required for each transaction.

<u>Cost of Items</u>	<u>Amount Paid</u>	<u>Change Required</u>
1. \$27.45	 \$100.00	\$72.55
2. \$45.87	 \$100.00	\$54.13
3. \$65.14	 \$100.00	\$34.86
4. \$16.19	 \$100.00	\$83.81
5. \$65.00	 \$100.00	\$35.00

Images used with the permission of the Bank of Canada.

Making Change (G)

Calculate how much change is required for each transaction.

Cost of Items

Amount Paid

Change Required

1. \$97.22



\$100.00

2. \$23.89



\$100.00

3. \$88.49



\$100.00

4. \$8.32



\$100.00

5. \$77.66








\$100.00

Images used with the permission of the Bank of Canada.

Making Change (G) Answers

Calculate how much change is required for each transaction.

<u>Cost of Items</u>	<u>Amount Paid</u>	<u>Change Required</u>
1. \$97.22	 \$100.00	\$2.78
2. \$23.89	 \$100.00	\$76.11
3. \$88.49	 \$100.00	\$11.51
4. \$8.32	 \$100.00	\$91.68
5. \$77.66	 \$100.00	\$22.34

Images used with the permission of the Bank of Canada.

Making Change (H)

Calculate how much change is required for each transaction.

Cost of Items

Amount Paid

Change Required

1. \$18.18



\$100.00

2. \$41.21



\$100.00

3. \$59.42



\$100.00

4. \$35.84



\$100.00

5. \$77.58








\$100.00

Images used with the permission of the Bank of Canada.

Making Change (H) Answers

Calculate how much change is required for each transaction.

<u>Cost of Items</u>	<u>Amount Paid</u>	<u>Change Required</u>
1. \$18.18	 \$100.00	\$81.82
2. \$41.21	 \$100.00	\$58.79
3. \$59.42	 \$100.00	\$40.58
4. \$35.84	 \$100.00	\$64.16
5. \$77.58	 \$100.00	\$22.42

Images used with the permission of the Bank of Canada.

Making Change (I)

Calculate how much change is required for each transaction.

Cost of Items

Amount Paid

Change Required

1. \$38.27



\$100.00

2. \$47.92



\$100.00

3. \$24.83



\$100.00

4. \$12.73



\$100.00

5. \$80.46








\$100.00

Images used with the permission of the Bank of Canada.

Making Change (I) Answers

Calculate how much change is required for each transaction.

<u>Cost of Items</u>	<u>Amount Paid</u>	<u>Change Required</u>
1. \$38.27	 \$100.00	\$61.73
2. \$47.92	 \$100.00	\$52.08
3. \$24.83	 \$100.00	\$75.17
4. \$12.73	 \$100.00	\$87.27
5. \$80.46	 \$100.00	\$19.54

Images used with the permission of the Bank of Canada.

Making Change (J)

Calculate how much change is required for each transaction.

Cost of Items

Amount Paid

Change Required

1. \$98.25



\$100.00

2. \$37.72



\$100.00

3. \$63.25



\$100.00

4. \$60.45



\$100.00

5. \$58.12








\$100.00

Images used with the permission of the Bank of Canada.

Making Change (J) Answers

Calculate how much change is required for each transaction.

<u>Cost of Items</u>	<u>Amount Paid</u>	<u>Change Required</u>
1. \$98.25	 \$100.00	\$1.75
2. \$37.72	 \$100.00	\$62.28
3. \$63.25	 \$100.00	\$36.75
4. \$60.45	 \$100.00	\$39.55
5. \$58.12	 \$100.00	\$41.88

Images used with the permission of the Bank of Canada.