

Making Change (A)

Calculate how much change is required for each transaction.

Cost of Items

Amount Paid

Change Required

1. \$3.71



\$10.00

2. \$8.07



\$10.00

3. \$2.02



\$10.00

4. \$2.95



\$5.00

5. \$0.76








\$5.00

Images used with the permission of the Bank of Canada.

Making Change (A) Answers

Calculate how much change is required for each transaction.

	<u>Cost of Items</u>	<u>Amount Paid</u>	<u>Change Required</u>
1.	\$3.71	 \$10.00	\$6.29
2.	\$8.07	 \$10.00	\$1.93
3.	\$2.02	 \$10.00	\$7.98
4.	\$2.95	 \$5.00	\$2.05
5.	\$0.76	 \$5.00	\$4.24

Images used with the permission of the Bank of Canada.