

Making Change (F)

Calculate how much change is required for each transaction.

Cost of Items

Amount Paid

Change Required

1. \$2.21



\$5.00

2. \$8.82



\$10.00

3. \$6.33



\$10.00

4. \$9.36



\$10.00

5. \$3.36








\$5.00

Images used with the permission of the Bank of Canada.

Making Change (F) Answers

Calculate how much change is required for each transaction.

	<u>Cost of Items</u>	<u>Amount Paid</u>	<u>Change Required</u>
1.	\$2.21	 \$5.00	\$2.79
2.	\$8.82	 \$10.00	\$1.18
3.	\$6.33	 \$10.00	\$3.67
4.	\$9.36	 \$10.00	\$0.64
5.	\$3.36	 \$5.00	\$1.64

Images used with the permission of the Bank of Canada.