

# Making Change (A)

Calculate how much change is required for each transaction.

Cost of Items

Amount Paid

Change Required

1. \$3.71



\$10.00

2. \$8.07



\$10.00

3. \$2.02



\$10.00

4. \$2.95



\$5.00

5. \$0.76








\$5.00

Images used with the permission of the Bank of Canada.

# Making Change (A) Answers

Calculate how much change is required for each transaction.

	<u>Cost of Items</u>	<u>Amount Paid</u>	<u>Change Required</u>
1.	\$3.71	 \$10.00	\$6.29
2.	\$8.07	 \$10.00	\$1.93
3.	\$2.02	 \$10.00	\$7.98
4.	\$2.95	 \$5.00	\$2.05
5.	\$0.76	 \$5.00	\$4.24

Images used with the permission of the Bank of Canada.

## Making Change (B)

Calculate how much change is required for each transaction.

Cost of Items

Amount Paid

Change Required

1. \$3.99



\$5.00

2. \$5.58



\$10.00

3. \$2.82



\$10.00

4. \$3.74



\$5.00

5. \$9.34








\$10.00

Images used with the permission of the Bank of Canada.

## Making Change (B) Answers

Calculate how much change is required for each transaction.

	<u>Cost of Items</u>	<u>Amount Paid</u>	<u>Change Required</u>
1.	\$3.99	 \$5.00	\$1.01
2.	\$5.58	 \$10.00	\$4.42
3.	\$2.82	 \$10.00	\$7.18
4.	\$3.74	 \$5.00	\$1.26
5.	\$9.34	 \$10.00	\$0.66

Images used with the permission of the Bank of Canada.

# Making Change (C)

Calculate how much change is required for each transaction.

Cost of Items

Amount Paid

Change Required

1. \$3.49



\$10.00

2. \$4.78



\$5.00

3. \$3.88



\$10.00

4. \$2.75



\$5.00

5. \$0.10



\$10.00

Images used with the permission of the Bank of Canada.



# Making Change (C) Answers

Calculate how much change is required for each transaction.

Cost of Items

Amount Paid

Change Required

1. \$3.49



\$10.00

\$6.51

2. \$4.78



\$5.00

\$0.22

3. \$3.88



\$10.00

\$6.12

4. \$2.75



\$5.00

\$2.25

5. \$0.10



\$10.00

\$9.90

Images used with the permission of the Bank of Canada.

# Making Change (D)

Calculate how much change is required for each transaction.

Cost of Items

Amount Paid

Change Required

1. \$2.14



\$5.00

2. \$3.84



\$10.00

3. \$3.75



\$5.00

4. \$4.37



\$10.00

5. \$3.86




\$10.00

Images used with the permission of the Bank of Canada.

# Making Change (D) Answers

Calculate how much change is required for each transaction.

	<u>Cost of Items</u>	<u>Amount Paid</u>	<u>Change Required</u>
1.	\$2.14	 \$5.00	\$2.86
2.	\$3.84	 \$10.00	\$6.16
3.	\$3.75	 \$5.00	\$1.25
4.	\$4.37	 \$10.00	\$5.63
5.	\$3.86	 \$10.00	\$6.14

Images used with the permission of the Bank of Canada.



# Making Change (E)

Calculate how much change is required for each transaction.

Cost of Items

Amount Paid

Change Required

1. \$6.80



\$10.00

2. \$3.98



\$5.00

3. \$9.22



\$10.00

4. \$5.40



\$10.00

5. \$4.56








\$5.00

Images used with the permission of the Bank of Canada.

# Making Change (E) Answers

Calculate how much change is required for each transaction.

	<u>Cost of Items</u>	<u>Amount Paid</u>	<u>Change Required</u>
1.	\$6.80	 \$10.00	\$3.20
2.	\$3.98	 \$5.00	\$1.02
3.	\$9.22	 \$10.00	\$0.78
4.	\$5.40	 \$10.00	\$4.60
5.	\$4.56	 \$5.00	\$0.44

Images used with the permission of the Bank of Canada.

# Making Change (F)

Calculate how much change is required for each transaction.

Cost of Items

Amount Paid

Change Required

1. \$2.21



\$5.00

2. \$8.82



\$10.00

3. \$6.33



\$10.00

4. \$9.36



\$10.00

5. \$3.36








\$5.00

Images used with the permission of the Bank of Canada.

# Making Change (F) Answers

Calculate how much change is required for each transaction.

	<u>Cost of Items</u>	<u>Amount Paid</u>	<u>Change Required</u>
1.	\$2.21	 \$5.00	\$2.79
2.	\$8.82	 \$10.00	\$1.18
3.	\$6.33	 \$10.00	\$3.67
4.	\$9.36	 \$10.00	\$0.64
5.	\$3.36	 \$5.00	\$1.64

Images used with the permission of the Bank of Canada.

# Making Change (G)

Calculate how much change is required for each transaction.

Cost of Items

Amount Paid

Change Required

1. \$0.66



\$5.00

2. \$6.31



\$10.00

3. \$6.73



\$10.00

4. \$1.61



\$5.00

5. \$5.28








\$10.00

Images used with the permission of the Bank of Canada.



# Making Change (G) Answers

Calculate how much change is required for each transaction.

	<u>Cost of Items</u>	<u>Amount Paid</u>	<u>Change Required</u>
1.	\$0.66	 \$5.00	\$4.34
2.	\$6.31	 \$10.00	\$3.69
3.	\$6.73	 \$10.00	\$3.27
4.	\$1.61	 \$5.00	\$3.39
5.	\$5.28	 \$10.00	\$4.72

Images used with the permission of the Bank of Canada.

# Making Change (H)

Calculate how much change is required for each transaction.

Cost of Items

Amount Paid

Change Required

1. \$4.15



\$5.00

2. \$0.85



\$10.00

3. \$0.91



\$10.00

4. \$3.29



\$5.00

5. \$4.97




\$10.00

Images used with the permission of the Bank of Canada.

# Making Change (H) Answers

Calculate how much change is required for each transaction.

	<u>Cost of Items</u>	<u>Amount Paid</u>	<u>Change Required</u>
1.	\$4.15	 \$5.00	\$0.85
2.	\$0.85	 \$10.00	\$9.15
3.	\$0.91	 \$10.00	\$9.09
4.	\$3.29	 \$5.00	\$1.71
5.	\$4.97	 \$10.00	\$5.03

Images used with the permission of the Bank of Canada.

# Making Change (I)

Calculate how much change is required for each transaction.

Cost of Items

Amount Paid

Change Required

1. \$1.46



\$10.00

2. \$6.67



\$10.00

3. \$4.83



\$5.00

4. \$9.06



\$10.00

5. \$2.27



\$5.00

Images used with the permission of the Bank of Canada.

# Making Change (I) Answers

Calculate how much change is required for each transaction.

Cost of Items

Amount Paid

Change Required

1. \$1.46



\$10.00

\$8.54

2. \$6.67



\$10.00

\$3.33

3. \$4.83



\$5.00

\$0.17

4. \$9.06



\$10.00

\$0.94

5. \$2.27



\$5.00

\$2.73

Images used with the permission of the Bank of Canada.



# Making Change (J)

Calculate how much change is required for each transaction.

Cost of Items

Amount Paid

Change Required

1. \$6.72



\$10.00

2. \$0.33



\$5.00

3. \$2.92



\$10.00

4. \$2.07



\$10.00

5. \$4.88








\$5.00

Images used with the permission of the Bank of Canada.

# Making Change (J) Answers

Calculate how much change is required for each transaction.

	<u>Cost of Items</u>	<u>Amount Paid</u>	<u>Change Required</u>
1.	\$6.72	 \$10.00	\$3.28
2.	\$0.33	 \$5.00	\$4.67
3.	\$2.92	 \$10.00	\$7.08
4.	\$2.07	 \$10.00	\$7.93
5.	\$4.88	 \$5.00	\$0.12

Images used with the permission of the Bank of Canada.