

Making Change (A)

Calculate how much change is required for each transaction.

Cost of Items

Amount Paid

Change Required

1. \$15.44



\$20.00

2. \$0.27



\$5.00

3. \$14.87



\$20.00

4. \$6.27



\$10.00

5. \$5.45








\$10.00

Images used with the permission of the Bank of Canada.

Making Change (A) Answers

Calculate how much change is required for each transaction.

<u>Cost of Items</u>	<u>Amount Paid</u>	<u>Change Required</u>
1. \$15.44	 \$20.00	\$4.56
2. \$0.27	 \$5.00	\$4.73
3. \$14.87	 \$20.00	\$5.13
4. \$6.27	 \$10.00	\$3.73
5. \$5.45	 \$10.00	\$4.55

Images used with the permission of the Bank of Canada.