

Making Change (A)

Calculate how much change is required for each transaction.

Cost of Items

Amount Paid

Change Required

1. \$0.78



\$5.00

2. \$14.42



\$50.00

3. \$18.72



\$50.00

4. \$6.37



\$10.00

5. \$17.78








\$20.00

Images used with the permission of the Bank of Canada.

Making Change (A) Answers

Calculate how much change is required for each transaction.

	<u>Cost of Items</u>	<u>Amount Paid</u>	<u>Change Required</u>
1.	\$0.78	 \$5.00	\$4.22
2.	\$14.42	 \$50.00	\$35.58
3.	\$18.72	 \$50.00	\$31.28
4.	\$6.37	 \$10.00	\$3.63
5.	\$17.78	 \$20.00	\$2.22

Images used with the permission of the Bank of Canada.