

Making Change (A)

Calculate how much change is required for each transaction.

Cost of Items

Amount Paid

Change Required

1. \$0.78



\$5.00

2. \$14.42



\$50.00

3. \$18.72



\$50.00

4. \$6.37



\$10.00

5. \$17.78








\$20.00

Images used with the permission of the Bank of Canada.

Making Change (A) Answers

Calculate how much change is required for each transaction.

	<u>Cost of Items</u>	<u>Amount Paid</u>	<u>Change Required</u>
1.	\$0.78	 \$5.00	\$4.22
2.	\$14.42	 \$50.00	\$35.58
3.	\$18.72	 \$50.00	\$31.28
4.	\$6.37	 \$10.00	\$3.63
5.	\$17.78	 \$20.00	\$2.22

Images used with the permission of the Bank of Canada.

Making Change (B)

Calculate how much change is required for each transaction.

Cost of Items

Amount Paid

Change Required

1. \$37.20



\$50.00

2. \$3.69



\$5.00

3. \$3.94



\$10.00

4. \$24.07



\$50.00

5. \$1.37



\$20.00

Images used with the permission of the Bank of Canada.

Making Change (B) Answers

Calculate how much change is required for each transaction.

<u>Cost of Items</u>	<u>Amount Paid</u>	<u>Change Required</u>
1. \$37.20	 \$50.00	\$12.80
2. \$3.69	 \$5.00	\$1.31
3. \$3.94	 \$10.00	\$6.06
4. \$24.07	 \$50.00	\$25.93
5. \$1.37	 \$20.00	\$18.63

Images used with the permission of the Bank of Canada.

Making Change (C)

Calculate how much change is required for each transaction.

Cost of Items

Amount Paid

Change Required

1. \$33.85



\$50.00

2. \$5.11



\$10.00

3. \$6.39



\$20.00

4. \$3.25



\$5.00

5. \$31.85







\$50.00

Images used with the permission of the Bank of Canada.

Making Change (C) Answers

Calculate how much change is required for each transaction.

<u>Cost of Items</u>	<u>Amount Paid</u>	<u>Change Required</u>
1. \$33.85	 \$50.00	\$16.15
2. \$5.11	 \$10.00	\$4.89
3. \$6.39	 \$20.00	\$13.61
4. \$3.25	 \$5.00	\$1.75
5. \$31.85	 \$50.00	\$18.15

Images used with the permission of the Bank of Canada.

Making Change (D)

Calculate how much change is required for each transaction.

Cost of Items

Amount Paid

Change Required

1. \$48.81



\$50.00

2. \$3.37



\$5.00

3. \$29.62



\$50.00

4. \$6.19



\$20.00

5. \$0.80








\$10.00

Images used with the permission of the Bank of Canada.

Making Change (D) Answers

Calculate how much change is required for each transaction.

<u>Cost of Items</u>	<u>Amount Paid</u>	<u>Change Required</u>
1. \$48.81	 \$50.00	\$1.19
2. \$3.37	 \$5.00	\$1.63
3. \$29.62	 \$50.00	\$20.38
4. \$6.19	 \$20.00	\$13.81
5. \$0.80	 \$10.00	\$9.20

Images used with the permission of the Bank of Canada.

Making Change (E)

Calculate how much change is required for each transaction.

Cost of Items

Amount Paid

Change Required

1. \$0.38



\$20.00

2. \$13.21



\$50.00

3. \$7.13



\$10.00

4. \$34.22



\$50.00

5. \$3.40



\$5.00

Images used with the permission of the Bank of Canada.

Making Change (E) Answers

Calculate how much change is required for each transaction.

	<u>Cost of Items</u>	<u>Amount Paid</u>	<u>Change Required</u>
1.	\$0.38	 \$20.00	\$19.62
2.	\$13.21	 \$50.00	\$36.79
3.	\$7.13	 \$10.00	\$2.87
4.	\$34.22	 \$50.00	\$15.78
5.	\$3.40	 \$5.00	\$1.60

Images used with the permission of the Bank of Canada.

Making Change (F)

Calculate how much change is required for each transaction.

Cost of Items

Amount Paid

Change Required

1. \$45.89



\$50.00

2. \$16.47



\$20.00

3. \$12.10



\$50.00

4. \$3.52



\$10.00

5. \$3.22




\$5.00

Images used with the permission of the Bank of Canada.

Making Change (F) Answers

Calculate how much change is required for each transaction.

<u>Cost of Items</u>	<u>Amount Paid</u>	<u>Change Required</u>
1. \$45.89	 \$50.00	\$4.11
2. \$16.47	 \$20.00	\$3.53
3. \$12.10	 \$50.00	\$37.90
4. \$3.52	 \$10.00	\$6.48
5. \$3.22	 \$5.00	\$1.78

Images used with the permission of the Bank of Canada.

Making Change (G)

Calculate how much change is required for each transaction.

Cost of Items

Amount Paid

Change Required

1. \$3.59



\$5.00

2. \$10.20



\$20.00

3. \$24.71



\$50.00

4. \$2.93



\$10.00

5. \$23.53








\$50.00

Images used with the permission of the Bank of Canada.

Making Change (G) Answers

Calculate how much change is required for each transaction.

	<u>Cost of Items</u>	<u>Amount Paid</u>	<u>Change Required</u>
1.	\$3.59	 \$5.00	\$1.41
2.	\$10.20	 \$20.00	\$9.80
3.	\$24.71	 \$50.00	\$25.29
4.	\$2.93	 \$10.00	\$7.07
5.	\$23.53	 \$50.00	\$26.47

Images used with the permission of the Bank of Canada.

Making Change (H)

Calculate how much change is required for each transaction.

Cost of Items

Amount Paid

Change Required

1. \$2.78



\$10.00

2. \$1.80



\$5.00

3. \$47.75



\$50.00

4. \$34.62



\$50.00

5. \$13.54








\$20.00

Images used with the permission of the Bank of Canada.

Making Change (H) Answers

Calculate how much change is required for each transaction.

	<u>Cost of Items</u>	<u>Amount Paid</u>	<u>Change Required</u>
1.	\$2.78	 \$10.00	\$7.22
2.	\$1.80	 \$5.00	\$3.20
3.	\$47.75	 \$50.00	\$2.25
4.	\$34.62	 \$50.00	\$15.38
5.	\$13.54	 \$20.00	\$6.46

Images used with the permission of the Bank of Canada.

Making Change (I)

Calculate how much change is required for each transaction.

Cost of Items

Amount Paid

Change Required

1. \$49.79



\$50.00

2. \$43.74



\$50.00

3. \$1.29



\$10.00

4. \$2.61



\$5.00

5. \$19.93



\$20.00

Images used with the permission of the Bank of Canada.

Making Change (I) Answers

Calculate how much change is required for each transaction.

<u>Cost of Items</u>	<u>Amount Paid</u>	<u>Change Required</u>
1. \$49.79	 \$50.00	\$0.21
2. \$43.74	 \$50.00	\$6.26
3. \$1.29	 \$10.00	\$8.71
4. \$2.61	 \$5.00	\$2.39
5. \$19.93	 \$20.00	\$0.07

Images used with the permission of the Bank of Canada.

Making Change (J)

Calculate how much change is required for each transaction.

Cost of Items

Amount Paid

Change Required

1. \$42.89



\$50.00

2. \$0.83



\$5.00

3. \$6.79



\$10.00

4. \$19.05



\$50.00

5. \$9.63



\$20.00

Images used with the permission of the Bank of Canada.

Making Change (J) Answers

Calculate how much change is required for each transaction.

<u>Cost of Items</u>	<u>Amount Paid</u>	<u>Change Required</u>
1. \$42.89	 \$50.00	\$7.11
2. \$0.83	 \$5.00	\$4.17
3. \$6.79	 \$10.00	\$3.21
4. \$19.05	 \$50.00	\$30.95
5. \$9.63	 \$20.00	\$10.37

Images used with the permission of the Bank of Canada.