

# Making Change (A)

Calculate how much change is required for each transaction.

Cost of Items

Amount Paid

Change Required

1. \$4.50



\$5.00

2. \$8.35



\$10.00

3. \$47.78



\$50.00

4. \$10.00



\$20.00

5. \$19.71








\$100.00

Images used with the permission of the Bank of Canada.

# Making Change (A) Answers

Calculate how much change is required for each transaction.

	<u>Cost of Items</u>	<u>Amount Paid</u>	<u>Change Required</u>
1.	\$4.50	 \$5.00	\$0.50
2.	\$8.35	 \$10.00	\$1.65
3.	\$47.78	 \$50.00	\$2.22
4.	\$10.00	 \$20.00	\$10.00
5.	\$19.71	 \$100.00	\$80.29

Images used with the permission of the Bank of Canada.