




Making Change (A)

Calculate how much change is required for each transaction.

	<u>Cost of Items</u>	<u>Amount Paid</u>	<u>Change Required</u>
1.	€9.66	 €10.00	
2.	€5.21	 €10.00	
3.	€5.95	 €10.00	
4.	€9.15	 €10.00	
5.	€7.13	 €10.00	

Images from the European Central Bank and used under their reproduction rules.

Making Change (A) Answers

Calculate how much change is required for each transaction.

	<u>Cost of Items</u>	<u>Amount Paid</u>	<u>Change Required</u>
1.	€9.66	 €10.00	€0.34
2.	€5.21	 €10.00	€4.79
3.	€5.95	 €10.00	€4.05
4.	€9.15	 €10.00	€0.85
5.	€7.13	 €10.00	€2.87

Images from the European Central Bank and used under their reproduction rules.