

## Making Change (B)






Calculate how much change is required for each transaction.

	<u>Cost of Items</u>	<u>Amount Paid</u>	<u>Change Required</u>
1.	€0.04	 €10.00	
2.	€0.12	 €10.00	
3.	€1.07	 €10.00	
4.	€3.77	 €10.00	
5.	€7.17	 €10.00	

Images from the European Central Bank and used under their reproduction rules.

# Making Change (B) Answers

Calculate how much change is required for each transaction.

	<u>Cost of Items</u>	<u>Amount Paid</u>	<u>Change Required</u>
1.	€0.04	 €10.00	€9.96
2.	€0.12	 €10.00	€9.88
3.	€1.07	 €10.00	€8.93
4.	€3.77	 €10.00	€6.23
5.	€7.17	 €10.00	€2.83

Images from the European Central Bank and used under their reproduction rules.