

# Making Change (A)

Calculate how much change is required for each transaction.

Cost of Items

Amount Paid

Change Required

1. €2.44



€20.00

2. €9.20



€20.00

3. €9.75



€20.00

4. €1.22



€20.00

5. €6.10







€20.00

Images from the European Central Bank and used under their reproduction rules.

# Making Change (A) Answers

Calculate how much change is required for each transaction.

	<u>Cost of Items</u>	<u>Amount Paid</u>	<u>Change Required</u>
1.	€2.44	 €20.00	€17.56
2.	€9.20	 €20.00	€10.80
3.	€9.75	 €20.00	€10.25
4.	€1.22	 €20.00	€18.78
5.	€6.10	 €20.00	€13.90

Images from the European Central Bank and used under their reproduction rules.