

Making Change (F)






Calculate how much change is required for each transaction.

<u>Cost of Items</u>	<u>Amount Paid</u>	<u>Change Required</u>
1. €70.55	 €200.00	
2. €116.47	 €200.00	
3. €123.19	 €200.00	
4. €102.86	 €200.00	
5. €0.23	 €200.00	

Images from the European Central Bank and used under their reproduction rules.

Making Change (F) Answers

Calculate how much change is required for each transaction.

	<u>Cost of Items</u>	<u>Amount Paid</u>	<u>Change Required</u>
1.	€70.55	 €200.00	€129.45
2.	€116.47	 €200.00	€83.53
3.	€123.19	 €200.00	€76.81
4.	€102.86	 €200.00	€97.14
5.	€0.23	 €200.00	€199.77

Images from the European Central Bank and used under their reproduction rules.