

Making Change (E)

Calculate how much change is required for each transaction.

Cost of Items

Amount Paid

Change Required

1. \$4.28



\$5.00

2. \$4.51



\$5.00

3. \$3.39



\$5.00

4. \$4.02



\$5.00

5. \$3.59






\$5.00

Images from and copyright Reserve Bank of New Zealand.

Making Change (E) Answers

Calculate how much change is required for each transaction.

	<u>Cost of Items</u>	<u>Amount Paid</u>	<u>Change Required</u>
1.	\$4.28	 \$5.00	\$0.72
2.	\$4.51	 \$5.00	\$0.49
3.	\$3.39	 \$5.00	\$1.61
4.	\$4.02	 \$5.00	\$0.98
5.	\$3.59	 \$5.00	\$1.41

Images from and copyright Reserve Bank of New Zealand.