






Making Change (G)






Calculate how much change is required for each transaction.

	<u>Cost of Items</u>	<u>Amount Paid</u>	<u>Change Required</u>
1.	\$1.54	 \$5.00	
2.	\$2.57	 \$5.00	
3.	\$1.74	 \$5.00	
4.	\$3.08	 \$5.00	
5.	\$3.39	 \$5.00	

Images from and copyright Reserve Bank of New Zealand.

Making Change (G) Answers

Calculate how much change is required for each transaction.

	<u>Cost of Items</u>	<u>Amount Paid</u>	<u>Change Required</u>
1.	\$1.54	 \$5.00	\$3.46
2.	\$2.57	 \$5.00	\$2.43
3.	\$1.74	 \$5.00	\$3.26
4.	\$3.08	 \$5.00	\$1.92
5.	\$3.39	 \$5.00	\$1.61

Images from and copyright Reserve Bank of New Zealand.