

Making Change (H)

Calculate how much change is required for each transaction.

Cost of Items

Amount Paid

Change Required

1. \$4.22



\$5.00

2. \$3.87



\$5.00

3. \$2.21



\$5.00

4. \$0.07



\$5.00

5. \$2.61








\$5.00

Images from and copyright Reserve Bank of New Zealand.

Making Change (H) Answers

Calculate how much change is required for each transaction.

	<u>Cost of Items</u>	<u>Amount Paid</u>	<u>Change Required</u>
1.	\$4.22	 \$5.00	\$0.78
2.	\$3.87	 \$5.00	\$1.13
3.	\$2.21	 \$5.00	\$2.79
4.	\$0.07	 \$5.00	\$4.93
5.	\$2.61	 \$5.00	\$2.39

Images from and copyright Reserve Bank of New Zealand.