

# Making Change (A)

Calculate how much change is required for each transaction.

Cost of Items

Amount Paid

Change Required

1. \$3.08



\$5.00

2. \$1.30



\$5.00

3. \$2.53



\$5.00

4. \$1.58



\$5.00

5. \$0.07






\$5.00

Images from and copyright Reserve Bank of New Zealand.

# Making Change (A) Answers

Calculate how much change is required for each transaction.

	<u>Cost of Items</u>	<u>Amount Paid</u>	<u>Change Required</u>
1.	\$3.08	 \$5.00	\$1.92
2.	\$1.30	 \$5.00	\$3.70
3.	\$2.53	 \$5.00	\$2.47
4.	\$1.58	 \$5.00	\$3.42
5.	\$0.07	 \$5.00	\$4.93

Images from and copyright Reserve Bank of New Zealand.

## Making Change (B)

Calculate how much change is required for each transaction.

Cost of Items

Amount Paid

Change Required

1. \$1.34



\$5.00

2. \$2.87



\$5.00

3. \$2.81



\$5.00

4. \$4.12



\$5.00

5. \$0.91





\$5.00

Images from and copyright Reserve Bank of New Zealand.

# Making Change (B) Answers






Calculate how much change is required for each transaction.

	<u>Cost of Items</u>	<u>Amount Paid</u>	<u>Change Required</u>
1.	\$1.34	 \$5.00	\$3.66
2.	\$2.87	 \$5.00	\$2.13
3.	\$2.81	 \$5.00	\$2.19
4.	\$4.12	 \$5.00	\$0.88
5.	\$0.91	 \$5.00	\$4.09

Images from and copyright Reserve Bank of New Zealand.

# Making Change (C)



Calculate how much change is required for each transaction.

	<u>Cost of Items</u>	<u>Amount Paid</u>	<u>Change Required</u>
1.	\$2.01	 \$5.00	
2.	\$3.37	 \$5.00	
3.	\$2.50	 \$5.00	
4.	\$3.03	 \$5.00	
5.	\$1.62	 \$5.00	

Images from and copyright Reserve Bank of New Zealand.

# Making Change (C) Answers

Calculate how much change is required for each transaction.

	<u>Cost of Items</u>	<u>Amount Paid</u>	<u>Change Required</u>
1.	\$2.01	 \$5.00	\$2.99
2.	\$3.37	 \$5.00	\$1.63
3.	\$2.50	 \$5.00	\$2.50
4.	\$3.03	 \$5.00	\$1.97
5.	\$1.62	 \$5.00	\$3.38

Images from and copyright Reserve Bank of New Zealand.

# Making Change (D)

Calculate how much change is required for each transaction.

Cost of Items

Amount Paid

Change Required

1. \$1.79



\$5.00

2. \$1.06



\$5.00

3. \$1.26



\$5.00

4. \$4.45



\$5.00

5. \$0.17



\$5.00

Images from and copyright Reserve Bank of New Zealand.

# Making Change (D) Answers

Calculate how much change is required for each transaction.

	<u>Cost of Items</u>	<u>Amount Paid</u>	<u>Change Required</u>
1.	\$1.79	 \$5.00	\$3.21
2.	\$1.06	 \$5.00	\$3.94
3.	\$1.26	 \$5.00	\$3.74
4.	\$4.45	 \$5.00	\$0.55
5.	\$0.17	 \$5.00	\$4.83

Images from and copyright Reserve Bank of New Zealand.



# Making Change (E)

Calculate how much change is required for each transaction.

Cost of Items

Amount Paid

Change Required

1. \$4.28



\$5.00

2. \$4.51



\$5.00

3. \$3.39



\$5.00

4. \$4.02



\$5.00

5. \$3.59







\$5.00

Images from and copyright Reserve Bank of New Zealand.

# Making Change (E) Answers

Calculate how much change is required for each transaction.

	<u>Cost of Items</u>	<u>Amount Paid</u>	<u>Change Required</u>
1.	\$4.28	 \$5.00	\$0.72
2.	\$4.51	 \$5.00	\$0.49
3.	\$3.39	 \$5.00	\$1.61
4.	\$4.02	 \$5.00	\$0.98
5.	\$3.59	 \$5.00	\$1.41

Images from and copyright Reserve Bank of New Zealand.

# Making Change (F)

Calculate how much change is required for each transaction.

Cost of Items

Amount Paid

Change Required

1. \$4.80



\$5.00

2. \$1.22



\$5.00

3. \$2.98



\$5.00

4. \$1.95



\$5.00

5. \$1.68








\$5.00

Images from and copyright Reserve Bank of New Zealand.

# Making Change (F) Answers

Calculate how much change is required for each transaction.

	<u>Cost of Items</u>	<u>Amount Paid</u>	<u>Change Required</u>
1.	\$4.80	 \$5.00	\$0.20
2.	\$1.22	 \$5.00	\$3.78
3.	\$2.98	 \$5.00	\$2.02
4.	\$1.95	 \$5.00	\$3.05
5.	\$1.68	 \$5.00	\$3.32

Images from and copyright Reserve Bank of New Zealand.

# Making Change (G)

Calculate how much change is required for each transaction.

Cost of Items

Amount Paid

Change Required

1. \$1.54



\$5.00

2. \$2.57



\$5.00

3. \$1.74



\$5.00

4. \$3.08



\$5.00

5. \$3.39








\$5.00

Images from and copyright Reserve Bank of New Zealand.

# Making Change (G) Answers

Calculate how much change is required for each transaction.

	<u>Cost of Items</u>	<u>Amount Paid</u>	<u>Change Required</u>
1.	\$1.54	 \$5.00	\$3.46
2.	\$2.57	 \$5.00	\$2.43
3.	\$1.74	 \$5.00	\$3.26
4.	\$3.08	 \$5.00	\$1.92
5.	\$3.39	 \$5.00	\$1.61

Images from and copyright Reserve Bank of New Zealand.

# Making Change (H)

Calculate how much change is required for each transaction.

Cost of Items

Amount Paid

Change Required

1. \$4.22



\$5.00

2. \$3.87



\$5.00

3. \$2.21



\$5.00

4. \$0.07



\$5.00

5. \$2.61








\$5.00

Images from and copyright Reserve Bank of New Zealand.

# Making Change (H) Answers

Calculate how much change is required for each transaction.

	<u>Cost of Items</u>	<u>Amount Paid</u>	<u>Change Required</u>
1.	\$4.22	 \$5.00	\$0.78
2.	\$3.87	 \$5.00	\$1.13
3.	\$2.21	 \$5.00	\$2.79
4.	\$0.07	 \$5.00	\$4.93
5.	\$2.61	 \$5.00	\$2.39

Images from and copyright Reserve Bank of New Zealand.



# Making Change (I)

Calculate how much change is required for each transaction.

Cost of Items

Amount Paid

Change Required

1. \$4.79



\$5.00

2. \$4.92



\$5.00

3. \$2.46



\$5.00

4. \$1.48



\$5.00

5. \$2.13



\$5.00

Images from and copyright Reserve Bank of New Zealand.

# Making Change (I) Answers

Calculate how much change is required for each transaction.

	<u>Cost of Items</u>	<u>Amount Paid</u>	<u>Change Required</u>
1.	\$4.79	 \$5.00	\$0.21
2.	\$4.92	 \$5.00	\$0.08
3.	\$2.46	 \$5.00	\$2.54
4.	\$1.48	 \$5.00	\$3.52
5.	\$2.13	 \$5.00	\$2.87

Images from and copyright Reserve Bank of New Zealand.

# Making Change (J)

Calculate how much change is required for each transaction.

Cost of Items

Amount Paid

Change Required

1. \$4.35



\$5.00

2. \$4.77



\$5.00

3. \$4.86



\$5.00

4. \$3.06



\$5.00

5. \$3.24



\$5.00

Images from and copyright Reserve Bank of New Zealand.

# Making Change (J) Answers

Calculate how much change is required for each transaction.

	<u>Cost of Items</u>	<u>Amount Paid</u>	<u>Change Required</u>
1.	\$4.35	 \$5.00	\$0.65
2.	\$4.77	 \$5.00	\$0.23
3.	\$4.86	 \$5.00	\$0.14
4.	\$3.06	 \$5.00	\$1.94
5.	\$3.24	 \$5.00	\$1.76

Images from and copyright Reserve Bank of New Zealand.