

Making Change (A)

Calculate how much change is required for each transaction.

Cost of Items

Amount Paid

Change Required

1. \$1.86



\$10.00

2. \$8.81



\$10.00

3. \$8.12



\$10.00

4. \$1.01



\$10.00

5. \$4.29








\$10.00

Images from and copyright Reserve Bank of New Zealand.

Making Change (A) Answers

Calculate how much change is required for each transaction.

	<u>Cost of Items</u>	<u>Amount Paid</u>	<u>Change Required</u>
1.	\$1.86	 \$10.00	\$8.14
2.	\$8.81	 \$10.00	\$1.19
3.	\$8.12	 \$10.00	\$1.88
4.	\$1.01	 \$10.00	\$8.99
5.	\$4.29	 \$10.00	\$5.71

Images from and copyright Reserve Bank of New Zealand.