






Making Change (B)






Calculate how much change is required for each transaction.

	<u>Cost of Items</u>	<u>Amount Paid</u>	<u>Change Required</u>
1.	\$2.71	 \$10.00	
2.	\$0.72	 \$10.00	
3.	\$8.08	 \$10.00	
4.	\$6.79	 \$10.00	
5.	\$6.35	 \$10.00	

Images from and copyright Reserve Bank of New Zealand.

Making Change (B) Answers

Calculate how much change is required for each transaction.

	<u>Cost of Items</u>	<u>Amount Paid</u>	<u>Change Required</u>
1.	\$2.71	 \$10.00	\$7.29
2.	\$0.72	 \$10.00	\$9.28
3.	\$8.08	 \$10.00	\$1.92
4.	\$6.79	 \$10.00	\$3.21
5.	\$6.35	 \$10.00	\$3.65

Images from and copyright Reserve Bank of New Zealand.