

Making Change (G)

Calculate how much change is required for each transaction.

Cost of Items

Amount Paid

Change Required

1. \$4.67



\$10.00

2. \$7.81



\$10.00

3. \$9.77



\$10.00

4. \$1.70



\$10.00

5. \$3.80








\$10.00

Images from and copyright Reserve Bank of New Zealand.

Making Change (G) Answers

Calculate how much change is required for each transaction.

	<u>Cost of Items</u>	<u>Amount Paid</u>	<u>Change Required</u>
1.	\$4.67	 \$10.00	\$5.33
2.	\$7.81	 \$10.00	\$2.19
3.	\$9.77	 \$10.00	\$0.23
4.	\$1.70	 \$10.00	\$8.30
5.	\$3.80	 \$10.00	\$6.20

Images from and copyright Reserve Bank of New Zealand.