

Making Change (H)

Calculate how much change is required for each transaction.

Cost of Items

Amount Paid

Change Required

1. \$1.60



\$10.00

2. \$3.47



\$10.00

3. \$5.15



\$10.00

4. \$7.29



\$10.00

5. \$2.81








\$10.00

Images from and copyright Reserve Bank of New Zealand.

Making Change (H) Answers

Calculate how much change is required for each transaction.

	<u>Cost of Items</u>	<u>Amount Paid</u>	<u>Change Required</u>
1.	\$1.60	 \$10.00	\$8.40
2.	\$3.47	 \$10.00	\$6.53
3.	\$5.15	 \$10.00	\$4.85
4.	\$7.29	 \$10.00	\$2.71
5.	\$2.81	 \$10.00	\$7.19

Images from and copyright Reserve Bank of New Zealand.