

Making Change (J)

Calculate how much change is required for each transaction.

Cost of Items

Amount Paid

Change Required

1. \$5.60



\$10.00

2. \$9.42



\$10.00

3. \$3.50



\$10.00

4. \$4.45



\$10.00

5. \$4.82








\$10.00

Images from and copyright Reserve Bank of New Zealand.

Making Change (J) Answers

Calculate how much change is required for each transaction.

	<u>Cost of Items</u>	<u>Amount Paid</u>	<u>Change Required</u>
1.	\$5.60	 \$10.00	\$4.40
2.	\$9.42	 \$10.00	\$0.58
3.	\$3.50	 \$10.00	\$6.50
4.	\$4.45	 \$10.00	\$5.55
5.	\$4.82	 \$10.00	\$5.18

Images from and copyright Reserve Bank of New Zealand.