

Making Change (A)






Calculate how much change is required for each transaction.

	<u>Cost of Items</u>	<u>Amount Paid</u>	<u>Change Required</u>
1.	\$1.86	 \$10.00	
2.	\$8.81	 \$10.00	
3.	\$8.12	 \$10.00	
4.	\$1.01	 \$10.00	
5.	\$4.29	 \$10.00	

Images from and copyright Reserve Bank of New Zealand.

Making Change (A) Answers






Calculate how much change is required for each transaction.

	<u>Cost of Items</u>	<u>Amount Paid</u>	<u>Change Required</u>
1.	\$1.86	 \$10.00	\$8.14
2.	\$8.81	 \$10.00	\$1.19
3.	\$8.12	 \$10.00	\$1.88
4.	\$1.01	 \$10.00	\$8.99
5.	\$4.29	 \$10.00	\$5.71

Images from and copyright Reserve Bank of New Zealand.

Making Change (B)






Calculate how much change is required for each transaction.

	<u>Cost of Items</u>	<u>Amount Paid</u>	<u>Change Required</u>
1.	\$2.71	 \$10.00	
2.	\$0.72	 \$10.00	
3.	\$8.08	 \$10.00	
4.	\$6.79	 \$10.00	
5.	\$6.35	 \$10.00	

Images from and copyright Reserve Bank of New Zealand.

Making Change (B) Answers

Calculate how much change is required for each transaction.

	<u>Cost of Items</u>	<u>Amount Paid</u>	<u>Change Required</u>
1.	\$2.71	 \$10.00	\$7.29
2.	\$0.72	 \$10.00	\$9.28
3.	\$8.08	 \$10.00	\$1.92
4.	\$6.79	 \$10.00	\$3.21
5.	\$6.35	 \$10.00	\$3.65

Images from and copyright Reserve Bank of New Zealand.

Making Change (C)

Calculate how much change is required for each transaction.

Cost of Items

Amount Paid

Change Required

1. \$9.05



\$10.00

2. \$1.57



\$10.00

3. \$3.44



\$10.00

4. \$0.81



\$10.00

5. \$1.06





\$10.00

Images from and copyright Reserve Bank of New Zealand.

Making Change (C) Answers


Calculate how much change is required for each transaction.

	<u>Cost of Items</u>	<u>Amount Paid</u>	<u>Change Required</u>
1.	\$9.05	 \$10.00	\$0.95
2.	\$1.57	 \$10.00	\$8.43
3.	\$3.44	 \$10.00	\$6.56
4.	\$0.81	 \$10.00	\$9.19
5.	\$1.06	 \$10.00	\$8.94

Images from and copyright Reserve Bank of New Zealand.

Making Change (D)





Calculate how much change is required for each transaction.

	<u>Cost of Items</u>	<u>Amount Paid</u>	<u>Change Required</u>
1.	\$5.86	 \$10.00	
2.	\$9.23	 \$10.00	
3.	\$4.88	 \$10.00	
4.	\$9.16	 \$10.00	
5.	\$7.09	 \$10.00	

Images from and copyright Reserve Bank of New Zealand.

Making Change (D) Answers

Calculate how much change is required for each transaction.

	<u>Cost of Items</u>	<u>Amount Paid</u>	<u>Change Required</u>
1.	\$5.86	 \$10.00	\$4.14
2.	\$9.23	 \$10.00	\$0.77
3.	\$4.88	 \$10.00	\$5.12
4.	\$9.16	 \$10.00	\$0.84
5.	\$7.09	 \$10.00	\$2.91

Images from and copyright Reserve Bank of New Zealand.

Making Change (E)

Calculate how much change is required for each transaction.

Cost of Items

Amount Paid

Change Required

1. \$7.40



\$10.00

2. \$4.06



\$10.00

3. \$5.33



\$10.00

4. \$6.61



\$10.00

5. \$7.70





\$10.00

Images from and copyright Reserve Bank of New Zealand.

Making Change (E) Answers

Calculate how much change is required for each transaction.

	<u>Cost of Items</u>	<u>Amount Paid</u>	<u>Change Required</u>
1.	\$7.40	 \$10.00	\$2.60
2.	\$4.06	 \$10.00	\$5.94
3.	\$5.33	 \$10.00	\$4.67
4.	\$6.61	 \$10.00	\$3.39
5.	\$7.70	 \$10.00	\$2.30

Images from and copyright Reserve Bank of New Zealand.

Making Change (F)

Calculate how much change is required for each transaction.

Cost of Items

Amount Paid

Change Required

1. \$7.78



\$10.00

2. \$6.02



\$10.00

3. \$0.94



\$10.00

4. \$0.40



\$10.00

5. \$4.32








\$10.00

Images from and copyright Reserve Bank of New Zealand.

Making Change (F) Answers

Calculate how much change is required for each transaction.

	<u>Cost of Items</u>	<u>Amount Paid</u>	<u>Change Required</u>
1.	\$7.78	 \$10.00	\$2.22
2.	\$6.02	 \$10.00	\$3.98
3.	\$0.94	 \$10.00	\$9.06
4.	\$0.40	 \$10.00	\$9.60
5.	\$4.32	 \$10.00	\$5.68

Images from and copyright Reserve Bank of New Zealand.

Making Change (G)






Calculate how much change is required for each transaction.

	<u>Cost of Items</u>	<u>Amount Paid</u>	<u>Change Required</u>
1.	\$4.67	 \$10.00	
2.	\$7.81	 \$10.00	
3.	\$9.77	 \$10.00	
4.	\$1.70	 \$10.00	
5.	\$3.80	 \$10.00	

Images from and copyright Reserve Bank of New Zealand.

Making Change (G) Answers





Calculate how much change is required for each transaction.

	<u>Cost of Items</u>	<u>Amount Paid</u>	<u>Change Required</u>
1.	\$4.67	 \$10.00	\$5.33
2.	\$7.81	 \$10.00	\$2.19
3.	\$9.77	 \$10.00	\$0.23
4.	\$1.70	 \$10.00	\$8.30
5.	\$3.80	 \$10.00	\$6.20

Images from and copyright Reserve Bank of New Zealand.

Making Change (H)






Calculate how much change is required for each transaction.

	<u>Cost of Items</u>	<u>Amount Paid</u>	<u>Change Required</u>
1.	\$1.60	 \$10.00	
2.	\$3.47	 \$10.00	
3.	\$5.15	 \$10.00	
4.	\$7.29	 \$10.00	
5.	\$2.81	 \$10.00	

Images from and copyright Reserve Bank of New Zealand.

Making Change (H) Answers

Calculate how much change is required for each transaction.

	<u>Cost of Items</u>	<u>Amount Paid</u>	<u>Change Required</u>
1.	\$1.60	 \$10.00	\$8.40
2.	\$3.47	 \$10.00	\$6.53
3.	\$5.15	 \$10.00	\$4.85
4.	\$7.29	 \$10.00	\$2.71
5.	\$2.81	 \$10.00	\$7.19

Images from and copyright Reserve Bank of New Zealand.

Making Change (I)

Calculate how much change is required for each transaction.

Cost of Items

Amount Paid

Change Required

1. \$5.39



\$10.00

2. \$0.65



\$10.00

3. \$5.47



\$10.00

4. \$2.62



\$10.00

5. \$1.16








\$10.00

Images from and copyright Reserve Bank of New Zealand.

Making Change (I) Answers

Calculate how much change is required for each transaction.

	<u>Cost of Items</u>	<u>Amount Paid</u>	<u>Change Required</u>
1.	\$5.39	 \$10.00	\$4.61
2.	\$0.65	 \$10.00	\$9.35
3.	\$5.47	 \$10.00	\$4.53
4.	\$2.62	 \$10.00	\$7.38
5.	\$1.16	 \$10.00	\$8.84

Images from and copyright Reserve Bank of New Zealand.

Making Change (J)

Calculate how much change is required for each transaction.

Cost of Items

Amount Paid

Change Required

1. \$5.60



\$10.00

2. \$9.42



\$10.00

3. \$3.50



\$10.00

4. \$4.45



\$10.00

5. \$4.82








\$10.00

Images from and copyright Reserve Bank of New Zealand.

Making Change (J) Answers

Calculate how much change is required for each transaction.

	<u>Cost of Items</u>	<u>Amount Paid</u>	<u>Change Required</u>
1.	\$5.60	 \$10.00	\$4.40
2.	\$9.42	 \$10.00	\$0.58
3.	\$3.50	 \$10.00	\$6.50
4.	\$4.45	 \$10.00	\$5.55
5.	\$4.82	 \$10.00	\$5.18

Images from and copyright Reserve Bank of New Zealand.