






Making Change (B)






Calculate how much change is required for each transaction.

	<u>Cost of Items</u>	<u>Amount Paid</u>	<u>Change Required</u>
1.	\$1.99	 \$5.00	
2.	\$1.63	 \$10.00	
3.	\$2.93	 \$10.00	
4.	\$0.27	 \$10.00	
5.	\$2.13	 \$5.00	

Images from and copyright Reserve Bank of New Zealand.

Making Change (B) Answers

Calculate how much change is required for each transaction.

	<u>Cost of Items</u>	<u>Amount Paid</u>	<u>Change Required</u>
1.	\$1.99	 \$5.00	\$3.01
2.	\$1.63	 \$10.00	\$8.37
3.	\$2.93	 \$10.00	\$7.07
4.	\$0.27	 \$10.00	\$9.73
5.	\$2.13	 \$5.00	\$2.87

Images from and copyright Reserve Bank of New Zealand.