

Making Change (J)

Calculate how much change is required for each transaction.

Cost of Items

Amount Paid

Change Required

1. \$1.72



\$5.00

2. \$6.38



\$10.00

3. \$9.45



\$10.00

4. \$0.07



\$10.00

5. \$2.29








\$5.00

Images from and copyright Reserve Bank of New Zealand.

Making Change (J) Answers

Calculate how much change is required for each transaction.

	<u>Cost of Items</u>	<u>Amount Paid</u>	<u>Change Required</u>
1.	\$1.72	 \$5.00	\$3.28
2.	\$6.38	 \$10.00	\$3.62
3.	\$9.45	 \$10.00	\$0.55
4.	\$0.07	 \$10.00	\$9.93
5.	\$2.29	 \$5.00	\$2.71

Images from and copyright Reserve Bank of New Zealand.