







Next Pound Up (A)

Name: _____

Date: _____

How many pounds do you need for each amount?

									
£1	£2	£3	£4	£5	£6	£7	£8	£9	£10

1. £5.44

11. £0.64

2. £4.25

12. £8.69

3. £1.55

13. £9.46

4. £8.18

14. £1.36

5. £2.74

15. £3.21

6. £3.96

16. £4.62

7. £6.10

17. £5.83

8. £0.37

18. £7.47

9. £9.94

19. £2.44

10. £7.90

20. £6.71

Coin image from the Royal Mint.

Next Pound Up (A) Answers

Name: _____

Date: _____

How many pounds do you need for each amount?

									
£1	£2	£3	£4	£5	£6	£7	£8	£9	£10

- | | | | |
|-----------|-----|-----------|-----|
| 1. £5.44 | £6 | 11. £0.64 | £1 |
| 2. £4.25 | £5 | 12. £8.69 | £9 |
| 3. £1.55 | £2 | 13. £9.46 | £10 |
| 4. £8.18 | £9 | 14. £1.36 | £2 |
| 5. £2.74 | £3 | 15. £3.21 | £4 |
| 6. £3.96 | £4 | 16. £4.62 | £5 |
| 7. £6.10 | £7 | 17. £5.83 | £6 |
| 8. £0.37 | £1 | 18. £7.47 | £8 |
| 9. £9.94 | £10 | 19. £2.44 | £3 |
| 10. £7.90 | £8 | 20. £6.71 | £7 |

Coin image from the Royal Mint.