







# Next Pound Up (A)

Name: \_\_\_\_\_

Date: \_\_\_\_\_

How many pounds do you need for each amount?

									
£1	£2	£3	£4	£5	£6	£7	£8	£9	£10

1. £5.44

11. £0.64

2. £4.25

12. £8.69

3. £1.55

13. £9.46

4. £8.18

14. £1.36

5. £2.74

15. £3.21

6. £3.96

16. £4.62

7. £6.10

17. £5.83

8. £0.37

18. £7.47

9. £9.94

19. £2.44

10. £7.90

20. £6.71

Coin image from the Royal Mint.

# Next Pound Up (A) Answers

Name: \_\_\_\_\_

Date: \_\_\_\_\_

How many pounds do you need for each amount?

									
£1	£2	£3	£4	£5	£6	£7	£8	£9	£10

- |           |     |           |     |
|-----------|-----|-----------|-----|
| 1. £5.44  | £6  | 11. £0.64 | £1  |
| 2. £4.25  | £5  | 12. £8.69 | £9  |
| 3. £1.55  | £2  | 13. £9.46 | £10 |
| 4. £8.18  | £9  | 14. £1.36 | £2  |
| 5. £2.74  | £3  | 15. £3.21 | £4  |
| 6. £3.96  | £4  | 16. £4.62 | £5  |
| 7. £6.10  | £7  | 17. £5.83 | £6  |
| 8. £0.37  | £1  | 18. £7.47 | £8  |
| 9. £9.94  | £10 | 19. £2.44 | £3  |
| 10. £7.90 | £8  | 20. £6.71 | £7  |

Coin image from the Royal Mint.

# Next Pound Up (B)

Name: \_\_\_\_\_

Date: \_\_\_\_\_

How many pounds do you need for each amount?

									
£1	£2	£3	£4	£5	£6	£7	£8	£9	£10

- |           |                      |           |                      |
|-----------|----------------------|-----------|----------------------|
| 1. £9.34  | <input type="text"/> | 11. £3.76 | <input type="text"/> |
| 2. £6.91  | <input type="text"/> | 12. £1.05 | <input type="text"/> |
| 3. £2.07  | <input type="text"/> | 13. £9.97 | <input type="text"/> |
| 4. £4.24  | <input type="text"/> | 14. £0.20 | <input type="text"/> |
| 5. £6.14  | <input type="text"/> | 15. £5.24 | <input type="text"/> |
| 6. £7.66  | <input type="text"/> | 16. £1.56 | <input type="text"/> |
| 7. £8.68  | <input type="text"/> | 17. £2.64 | <input type="text"/> |
| 8. £3.17  | <input type="text"/> | 18. £4.87 | <input type="text"/> |
| 9. £5.51  | <input type="text"/> | 19. £7.13 | <input type="text"/> |
| 10. £0.64 | <input type="text"/> | 20. £8.08 | <input type="text"/> |

Coin image from the Royal Mint.

# Next Pound Up (B) Answers

Name: \_\_\_\_\_

Date: \_\_\_\_\_

How many pounds do you need for each amount?

									
£1	£2	£3	£4	£5	£6	£7	£8	£9	£10

- |           |     |           |     |
|-----------|-----|-----------|-----|
| 1. £9.34  | £10 | 11. £3.76 | £4  |
| 2. £6.91  | £7  | 12. £1.05 | £2  |
| 3. £2.07  | £3  | 13. £9.97 | £10 |
| 4. £4.24  | £5  | 14. £0.20 | £1  |
| 5. £6.14  | £7  | 15. £5.24 | £6  |
| 6. £7.66  | £8  | 16. £1.56 | £2  |
| 7. £8.68  | £9  | 17. £2.64 | £3  |
| 8. £3.17  | £4  | 18. £4.87 | £5  |
| 9. £5.51  | £6  | 19. £7.13 | £8  |
| 10. £0.64 | £1  | 20. £8.08 | £9  |

Coin image from the Royal Mint.

# Next Pound Up (C)

Name: \_\_\_\_\_

Date: \_\_\_\_\_

How many pounds do you need for each amount?

									
£1	£2	£3	£4	£5	£6	£7	£8	£9	£10

- |           |                      |           |                      |
|-----------|----------------------|-----------|----------------------|
| 1. £4.00  | <input type="text"/> | 11. £2.64 | <input type="text"/> |
| 2. £4.13  | <input type="text"/> | 12. £5.67 | <input type="text"/> |
| 3. £6.90  | <input type="text"/> | 13. £3.45 | <input type="text"/> |
| 4. £9.43  | <input type="text"/> | 14. £5.07 | <input type="text"/> |
| 5. £1.95  | <input type="text"/> | 15. £0.71 | <input type="text"/> |
| 6. £7.81  | <input type="text"/> | 16. £8.16 | <input type="text"/> |
| 7. £4.60  | <input type="text"/> | 17. £0.19 | <input type="text"/> |
| 8. £2.12  | <input type="text"/> | 18. £9.60 | <input type="text"/> |
| 9. £1.47  | <input type="text"/> | 19. £6.30 | <input type="text"/> |
| 10. £8.86 | <input type="text"/> | 20. £7.50 | <input type="text"/> |

Coin image from the Royal Mint.

# Next Pound Up (C) Answers

Name: \_\_\_\_\_

Date: \_\_\_\_\_

How many pounds do you need for each amount?

									
£1	£2	£3	£4	£5	£6	£7	£8	£9	£10

- |           |     |           |     |
|-----------|-----|-----------|-----|
| 1. £4.00  | £4  | 11. £2.64 | £3  |
| 2. £4.13  | £5  | 12. £5.67 | £6  |
| 3. £6.90  | £7  | 13. £3.45 | £4  |
| 4. £9.43  | £10 | 14. £5.07 | £6  |
| 5. £1.95  | £2  | 15. £0.71 | £1  |
| 6. £7.81  | £8  | 16. £8.16 | £9  |
| 7. £4.60  | £5  | 17. £0.19 | £1  |
| 8. £2.12  | £3  | 18. £9.60 | £10 |
| 9. £1.47  | £2  | 19. £6.30 | £7  |
| 10. £8.86 | £9  | 20. £7.50 | £8  |

Coin image from the Royal Mint.

# Next Pound Up (D)

Name: \_\_\_\_\_

Date: \_\_\_\_\_

How many pounds do you need for each amount?

									
£1	£2	£3	£4	£5	£6	£7	£8	£9	£10

- |           |                      |           |                      |
|-----------|----------------------|-----------|----------------------|
| 1. £4.49  | <input type="text"/> | 11. £8.04 | <input type="text"/> |
| 2. £6.96  | <input type="text"/> | 12. £0.61 | <input type="text"/> |
| 3. £1.48  | <input type="text"/> | 13. £0.05 | <input type="text"/> |
| 4. £5.40  | <input type="text"/> | 14. £9.24 | <input type="text"/> |
| 5. £8.58  | <input type="text"/> | 15. £3.99 | <input type="text"/> |
| 6. £2.60  | <input type="text"/> | 16. £2.03 | <input type="text"/> |
| 7. £4.63  | <input type="text"/> | 17. £9.94 | <input type="text"/> |
| 8. £5.57  | <input type="text"/> | 18. £7.36 | <input type="text"/> |
| 9. £3.03  | <input type="text"/> | 19. £6.48 | <input type="text"/> |
| 10. £1.93 | <input type="text"/> | 20. £7.61 | <input type="text"/> |

Coin image from the Royal Mint.

# Next Pound Up (D) Answers

Name: \_\_\_\_\_

Date: \_\_\_\_\_

How many pounds do you need for each amount?

									
£1	£2	£3	£4	£5	£6	£7	£8	£9	£10

- |           |    |           |     |
|-----------|----|-----------|-----|
| 1. £4.49  | £5 | 11. £8.04 | £9  |
| 2. £6.96  | £7 | 12. £0.61 | £1  |
| 3. £1.48  | £2 | 13. £0.05 | £1  |
| 4. £5.40  | £6 | 14. £9.24 | £10 |
| 5. £8.58  | £9 | 15. £3.99 | £4  |
| 6. £2.60  | £3 | 16. £2.03 | £3  |
| 7. £4.63  | £5 | 17. £9.94 | £10 |
| 8. £5.57  | £6 | 18. £7.36 | £8  |
| 9. £3.03  | £4 | 19. £6.48 | £7  |
| 10. £1.93 | £2 | 20. £7.61 | £8  |

Coin image from the Royal Mint.



# Next Pound Up (E)

Name: \_\_\_\_\_

Date: \_\_\_\_\_

How many pounds do you need for each amount?

									
£1	£2	£3	£4	£5	£6	£7	£8	£9	£10

- |           |                      |           |                      |
|-----------|----------------------|-----------|----------------------|
| 1. £3.13  | <input type="text"/> | 11. £4.84 | <input type="text"/> |
| 2. £8.52  | <input type="text"/> | 12. £4.34 | <input type="text"/> |
| 3. £0.09  | <input type="text"/> | 13. £7.02 | <input type="text"/> |
| 4. £5.97  | <input type="text"/> | 14. £0.55 | <input type="text"/> |
| 5. £1.48  | <input type="text"/> | 15. £2.07 | <input type="text"/> |
| 6. £2.83  | <input type="text"/> | 16. £9.02 | <input type="text"/> |
| 7. £1.83  | <input type="text"/> | 17. £6.24 | <input type="text"/> |
| 8. £3.60  | <input type="text"/> | 18. £9.58 | <input type="text"/> |
| 9. £7.61  | <input type="text"/> | 19. £8.22 | <input type="text"/> |
| 10. £5.09 | <input type="text"/> | 20. £6.76 | <input type="text"/> |

Coin image from the Royal Mint.

# Next Pound Up (E) Answers

Name: \_\_\_\_\_

Date: \_\_\_\_\_

How many pounds do you need for each amount?

									
£1	£2	£3	£4	£5	£6	£7	£8	£9	£10

- |           |    |           |     |
|-----------|----|-----------|-----|
| 1. £3.13  | £4 | 11. £4.84 | £5  |
| 2. £8.52  | £9 | 12. £4.34 | £5  |
| 3. £0.09  | £1 | 13. £7.02 | £8  |
| 4. £5.97  | £6 | 14. £0.55 | £1  |
| 5. £1.48  | £2 | 15. £2.07 | £3  |
| 6. £2.83  | £3 | 16. £9.02 | £10 |
| 7. £1.83  | £2 | 17. £6.24 | £7  |
| 8. £3.60  | £4 | 18. £9.58 | £10 |
| 9. £7.61  | £8 | 19. £8.22 | £9  |
| 10. £5.09 | £6 | 20. £6.76 | £7  |




Coin image from the Royal Mint.

# Next Pound Up (F)

Name: \_\_\_\_\_

Date: \_\_\_\_\_

How many pounds do you need for each amount?

									
£1	£2	£3	£4	£5	£6	£7	£8	£9	£10

1. £1.49

11. £3.45

2. £5.24

12. £2.37

3. £2.62

13. £1.59

4. £9.40

14. £0.98

5. £8.10

15. £7.01

6. £7.91

16. £6.43

7. £4.67

17. £6.67

8. £4.46

18. £9.62

9. £3.68

19. £0.26

10. £8.82

20. £5.65

Coin image from the Royal Mint.

# Next Pound Up (F) Answers

Name: \_\_\_\_\_

Date: \_\_\_\_\_

How many pounds do you need for each amount?

									
£1	£2	£3	£4	£5	£6	£7	£8	£9	£10

- |           |     |           |     |
|-----------|-----|-----------|-----|
| 1. £1.49  | £2  | 11. £3.45 | £4  |
| 2. £5.24  | £6  | 12. £2.37 | £3  |
| 3. £2.62  | £3  | 13. £1.59 | £2  |
| 4. £9.40  | £10 | 14. £0.98 | £1  |
| 5. £8.10  | £9  | 15. £7.01 | £8  |
| 6. £7.91  | £8  | 16. £6.43 | £7  |
| 7. £4.67  | £5  | 17. £6.67 | £7  |
| 8. £4.46  | £5  | 18. £9.62 | £10 |
| 9. £3.68  | £4  | 19. £0.26 | £1  |
| 10. £8.82 | £9  | 20. £5.65 | £6  |

Coin image from the Royal Mint.

# Next Pound Up (G)

Name: \_\_\_\_\_

Date: \_\_\_\_\_

How many pounds do you need for each amount?

									
£1	£2	£3	£4	£5	£6	£7	£8	£9	£10

1. £4.26

11. £5.16

2. £6.42

12. £5.73

3. £3.23

13. £6.63

4. £0.52

14. £9.25

5. £2.31

15. £1.94

6. £7.65

16. £4.76

7. £0.43

17. £9.57

8. £7.50

18. £2.76

9. £3.83

19. £8.72

10. £1.18

20. £8.12

Coin image from the Royal Mint.

# Next Pound Up (G) Answers

Name: \_\_\_\_\_

Date: \_\_\_\_\_

How many pounds do you need for each amount?

									
£1	£2	£3	£4	£5	£6	£7	£8	£9	£10

- |           |    |           |     |
|-----------|----|-----------|-----|
| 1. £4.26  | £5 | 11. £5.16 | £6  |
| 2. £6.42  | £7 | 12. £5.73 | £6  |
| 3. £3.23  | £4 | 13. £6.63 | £7  |
| 4. £0.52  | £1 | 14. £9.25 | £10 |
| 5. £2.31  | £3 | 15. £1.94 | £2  |
| 6. £7.65  | £8 | 16. £4.76 | £5  |
| 7. £0.43  | £1 | 17. £9.57 | £10 |
| 8. £7.50  | £8 | 18. £2.76 | £3  |
| 9. £3.83  | £4 | 19. £8.72 | £9  |
| 10. £1.18 | £2 | 20. £8.12 | £9  |

Coin image from the Royal Mint.

# Next Pound Up (H)

Name: \_\_\_\_\_

Date: \_\_\_\_\_

How many pounds do you need for each amount?



1. £0.74

11. £4.78

2. £1.12

12. £9.65

3. £2.63

13. £6.87

4. £2.45

14. £5.86

5. £5.46

15. £8.87

6. £4.33

16. £7.24

7. £0.24

17. £3.53

8. £8.16

18. £7.56

9. £1.93

19. £3.18

10. £9.42

20. £6.13

Coin image from the Royal Mint.

# Next Pound Up (H) Answers

Name: \_\_\_\_\_

Date: \_\_\_\_\_

How many pounds do you need for each amount?

									
£1	£2	£3	£4	£5	£6	£7	£8	£9	£10

1. £0.74

£1

11. £4.78

£5

2. £1.12

£2

12. £9.65

£10

3. £2.63

£3

13. £6.87

£7

4. £2.45

£3

14. £5.86

£6

5. £5.46

£6

15. £8.87

£9

6. £4.33

£5

16. £7.24

£8

7. £0.24

£1

17. £3.53

£4

8. £8.16

£9

18. £7.56

£8

9. £1.93

£2

19. £3.18

£4

10. £9.42

£10

20. £6.13

£7

Coin image from the Royal Mint.



# Next Pound Up (I)

Name: \_\_\_\_\_

Date: \_\_\_\_\_

How many pounds do you need for each amount?



1. £9.70

11. £3.28

2. £9.28

12. £2.44

3. £4.17

13. £1.83

4. £3.00

14. £0.21

5. £7.61

15. £6.41

6. £7.41

16. £5.69

7. £4.94

17. £1.42

8. £6.71

18. £0.54

9. £5.42

19. £8.91

10. £8.36

20. £3.69

Coin image from the Royal Mint.

# Next Pound Up (I) Answers

Name: \_\_\_\_\_

Date: \_\_\_\_\_

How many pounds do you need for each amount?

									
£1	£2	£3	£4	£5	£6	£7	£8	£9	£10

- |           |     |           |    |
|-----------|-----|-----------|----|
| 1. £9.70  | £10 | 11. £3.28 | £4 |
| 2. £9.28  | £10 | 12. £2.44 | £3 |
| 3. £4.17  | £5  | 13. £1.83 | £2 |
| 4. £3.00  | £3  | 14. £0.21 | £1 |
| 5. £7.61  | £8  | 15. £6.41 | £7 |
| 6. £7.41  | £8  | 16. £5.69 | £6 |
| 7. £4.94  | £5  | 17. £1.42 | £2 |
| 8. £6.71  | £7  | 18. £0.54 | £1 |
| 9. £5.42  | £6  | 19. £8.91 | £9 |
| 10. £8.36 | £9  | 20. £3.69 | £4 |

Coin image from the Royal Mint.

# Next Pound Up (J)

Name: \_\_\_\_\_

Date: \_\_\_\_\_

How many pounds do you need for each amount?

									
£1	£2	£3	£4	£5	£6	£7	£8	£9	£10

1. £9.02

11. £5.72

2. £0.18

12. £1.92

3. £8.22

13. £2.13

4. £4.05

14. £3.37

5. £3.89

15. £7.98

6. £9.64

16. £4.76

7. £6.68

17. £5.04

8. £1.27

18. £8.76

9. £6.01

19. £7.06

10. £0.90

20. £2.54

Coin image from the Royal Mint.

# Next Pound Up (J) Answers

Name: \_\_\_\_\_

Date: \_\_\_\_\_

How many pounds do you need for each amount?

									
£1	£2	£3	£4	£5	£6	£7	£8	£9	£10

- |           |     |           |    |
|-----------|-----|-----------|----|
| 1. £9.02  | £10 | 11. £5.72 | £6 |
| 2. £0.18  | £1  | 12. £1.92 | £2 |
| 3. £8.22  | £9  | 13. £2.13 | £3 |
| 4. £4.05  | £5  | 14. £3.37 | £4 |
| 5. £3.89  | £4  | 15. £7.98 | £8 |
| 6. £9.64  | £10 | 16. £4.76 | £5 |
| 7. £6.68  | £7  | 17. £5.04 | £6 |
| 8. £1.27  | £2  | 18. £8.76 | £9 |
| 9. £6.01  | £7  | 19. £7.06 | £8 |
| 10. £0.90 | £1  | 20. £2.54 | £3 |

Coin image from the Royal Mint.