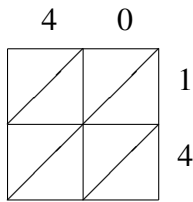
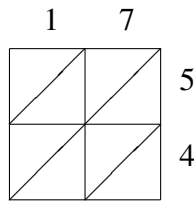


Lattice Multiplication (B)

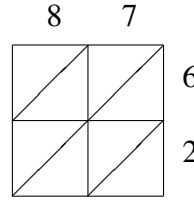
Use lattice multiplication to find each product.



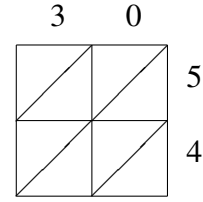
$40 \times 14 = \underline{\hspace{2cm}}$



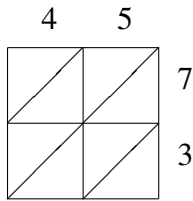
$17 \times 54 = \underline{\hspace{2cm}}$



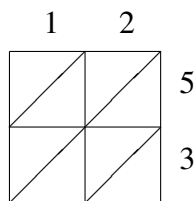
$87 \times 62 = \underline{\hspace{2cm}}$



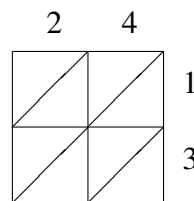
$30 \times 54 = \underline{\hspace{2cm}}$



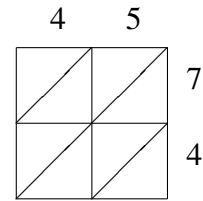
$45 \times 73 = \underline{\hspace{2cm}}$



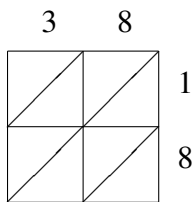
$12 \times 53 = \underline{\hspace{2cm}}$



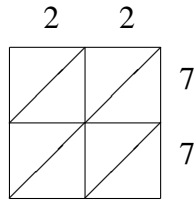
$24 \times 13 = \underline{\hspace{2cm}}$



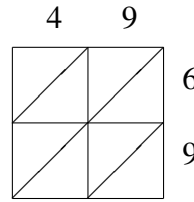
$45 \times 74 = \underline{\hspace{2cm}}$



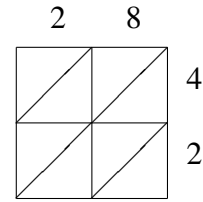
$38 \times 18 = \underline{\hspace{2cm}}$



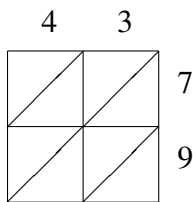
$22 \times 77 = \underline{\hspace{2cm}}$



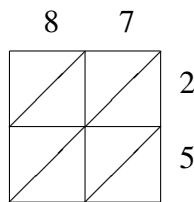
$49 \times 69 = \underline{\hspace{2cm}}$



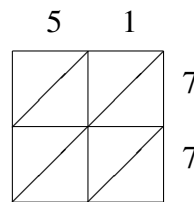
$28 \times 42 = \underline{\hspace{2cm}}$



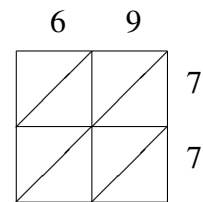
$43 \times 79 = \underline{\hspace{2cm}}$



$87 \times 25 = \underline{\hspace{2cm}}$



$51 \times 77 = \underline{\hspace{2cm}}$



$69 \times 77 = \underline{\hspace{2cm}}$