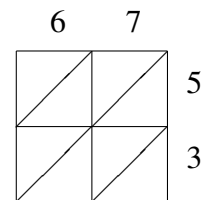
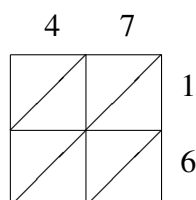
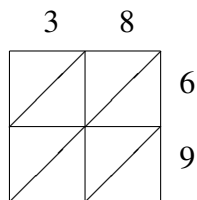
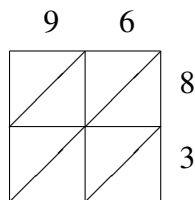


# Lattice Multiplication (F)

Use lattice multiplication to find each product.

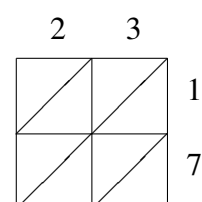
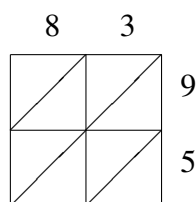
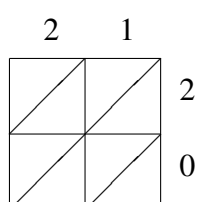
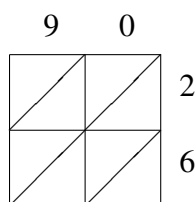


$96 \times 83 = \underline{\hspace{2cm}}$

$38 \times 69 = \underline{\hspace{2cm}}$

$47 \times 16 = \underline{\hspace{2cm}}$

$67 \times 53 = \underline{\hspace{2cm}}$

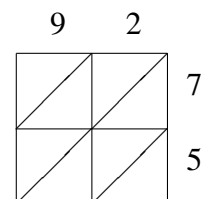
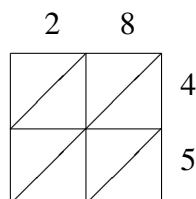
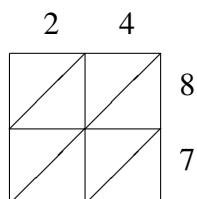
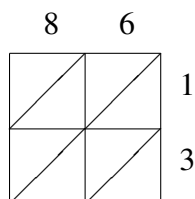


$90 \times 26 = \underline{\hspace{2cm}}$

$21 \times 20 = \underline{\hspace{2cm}}$

$83 \times 95 = \underline{\hspace{2cm}}$

$23 \times 17 = \underline{\hspace{2cm}}$

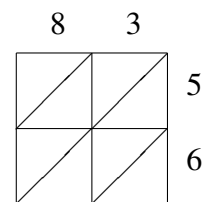
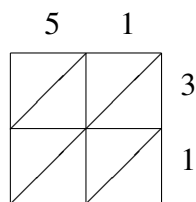
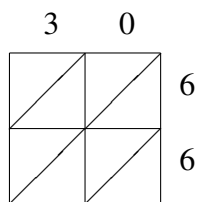
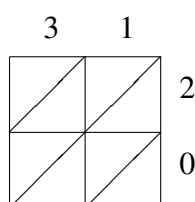


$86 \times 13 = \underline{\hspace{2cm}}$

$24 \times 87 = \underline{\hspace{2cm}}$

$28 \times 45 = \underline{\hspace{2cm}}$

$92 \times 75 = \underline{\hspace{2cm}}$



$31 \times 20 = \underline{\hspace{2cm}}$

$30 \times 66 = \underline{\hspace{2cm}}$

$51 \times 31 = \underline{\hspace{2cm}}$

$83 \times 56 = \underline{\hspace{2cm}}$