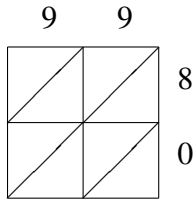
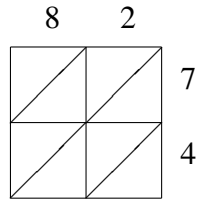


Lattice Multiplication (J)

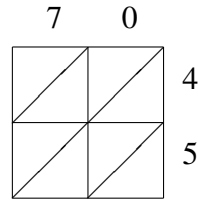
Use lattice multiplication to find each product.



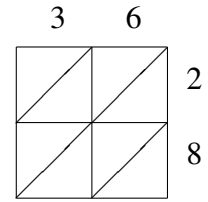
$99 \times 80 = \underline{\hspace{2cm}}$



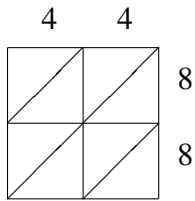
$82 \times 74 = \underline{\hspace{2cm}}$



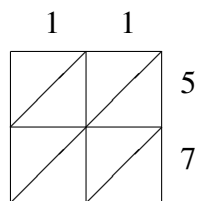
$70 \times 45 = \underline{\hspace{2cm}}$



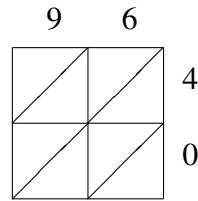
$36 \times 28 = \underline{\hspace{2cm}}$



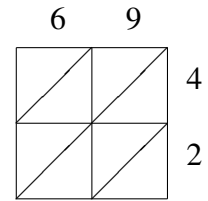
$44 \times 88 = \underline{\hspace{2cm}}$



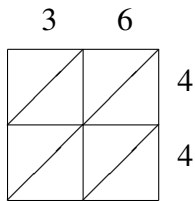
$11 \times 57 = \underline{\hspace{2cm}}$



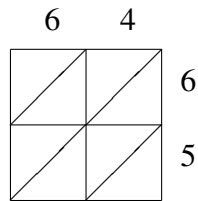
$96 \times 40 = \underline{\hspace{2cm}}$



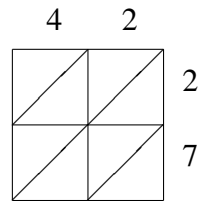
$69 \times 42 = \underline{\hspace{2cm}}$



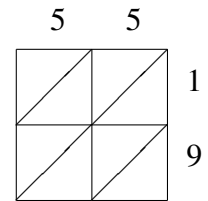
$36 \times 44 = \underline{\hspace{2cm}}$



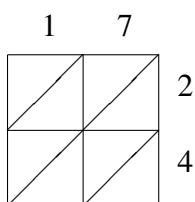
$64 \times 65 = \underline{\hspace{2cm}}$



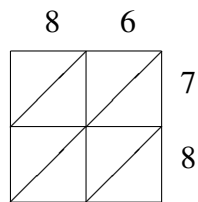
$42 \times 27 = \underline{\hspace{2cm}}$



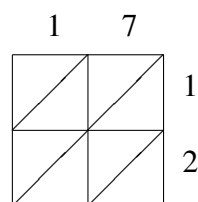
$55 \times 19 = \underline{\hspace{2cm}}$



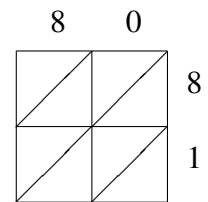
$17 \times 24 = \underline{\hspace{2cm}}$



$86 \times 78 = \underline{\hspace{2cm}}$



$17 \times 12 = \underline{\hspace{2cm}}$



$80 \times 81 = \underline{\hspace{2cm}}$