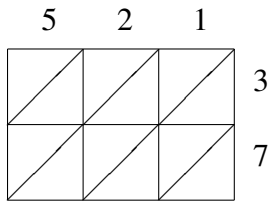
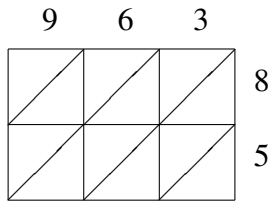


Lattice Multiplication (B)

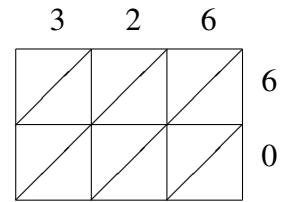
Use lattice multiplication to find each product.



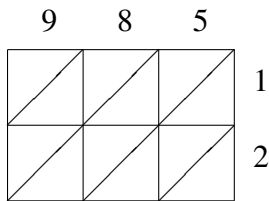
$521 \times 37 = \underline{\hspace{2cm}}$



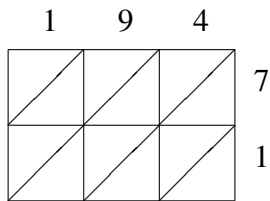
$963 \times 85 = \underline{\hspace{2cm}}$



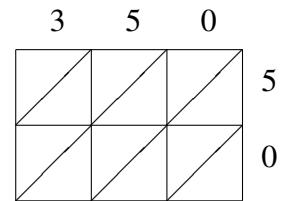
$326 \times 60 = \underline{\hspace{2cm}}$



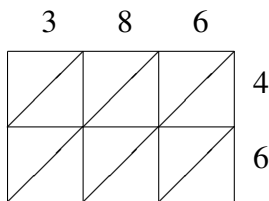
$985 \times 12 = \underline{\hspace{2cm}}$



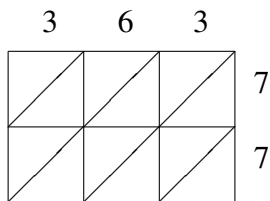
$194 \times 71 = \underline{\hspace{2cm}}$



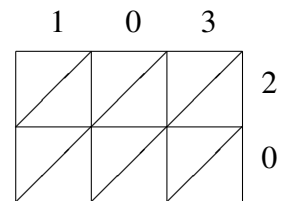
$350 \times 50 = \underline{\hspace{2cm}}$



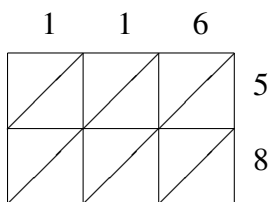
$386 \times 46 = \underline{\hspace{2cm}}$



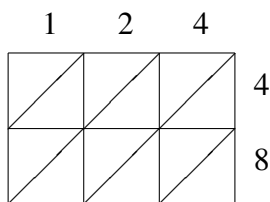
$363 \times 77 = \underline{\hspace{2cm}}$



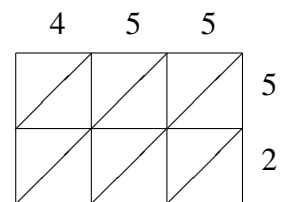
$103 \times 20 = \underline{\hspace{2cm}}$



$116 \times 58 = \underline{\hspace{2cm}}$



$124 \times 48 = \underline{\hspace{2cm}}$



$455 \times 52 = \underline{\hspace{2cm}}$