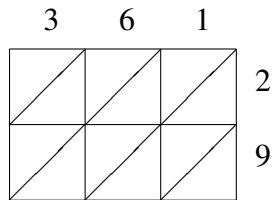
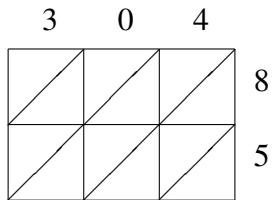


Lattice Multiplication (C)

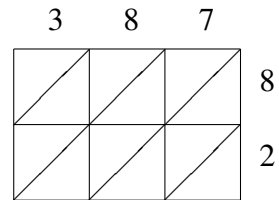
Use lattice multiplication to find each product.



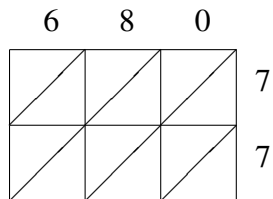
$361 \times 29 = \underline{\hspace{2cm}}$



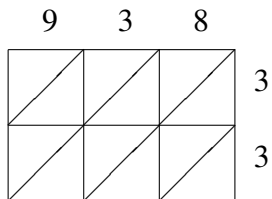
$304 \times 85 = \underline{\hspace{2cm}}$



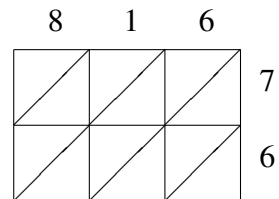
$387 \times 82 = \underline{\hspace{2cm}}$



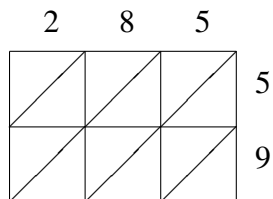
$680 \times 77 = \underline{\hspace{2cm}}$



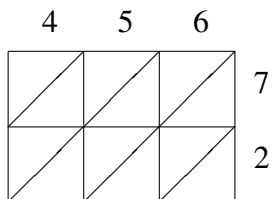
$938 \times 33 = \underline{\hspace{2cm}}$



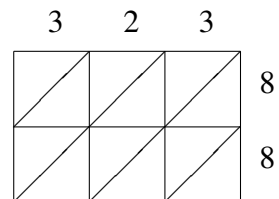
$816 \times 76 = \underline{\hspace{2cm}}$



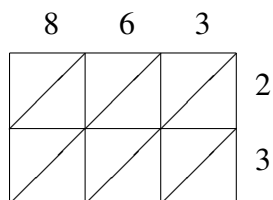
$285 \times 59 = \underline{\hspace{2cm}}$



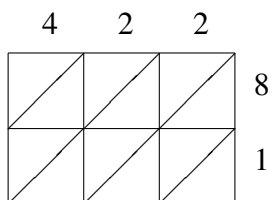
$456 \times 72 = \underline{\hspace{2cm}}$



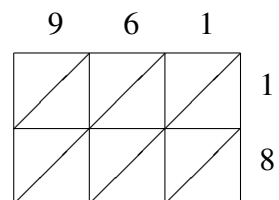
$323 \times 88 = \underline{\hspace{2cm}}$



$863 \times 23 = \underline{\hspace{2cm}}$



$422 \times 81 = \underline{\hspace{2cm}}$



$961 \times 18 = \underline{\hspace{2cm}}$