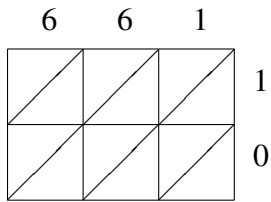
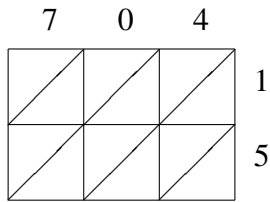


Lattice Multiplication (D)

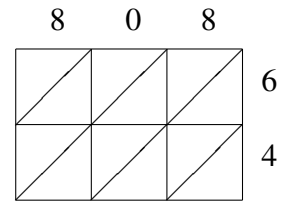
Use lattice multiplication to find each product.



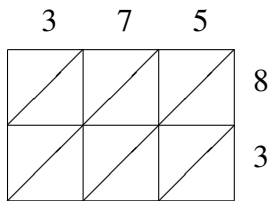
$661 \times 10 = \underline{\hspace{2cm}}$



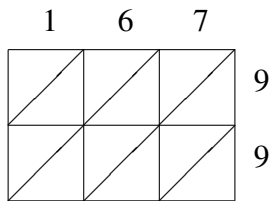
$704 \times 15 = \underline{\hspace{2cm}}$



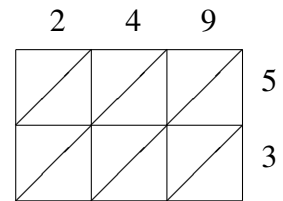
$808 \times 64 = \underline{\hspace{2cm}}$



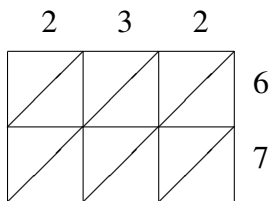
$375 \times 83 = \underline{\hspace{2cm}}$



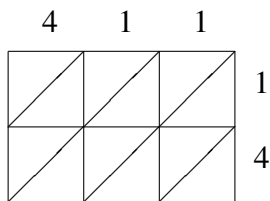
$167 \times 99 = \underline{\hspace{2cm}}$



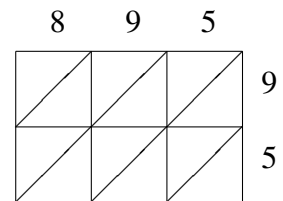
$249 \times 53 = \underline{\hspace{2cm}}$



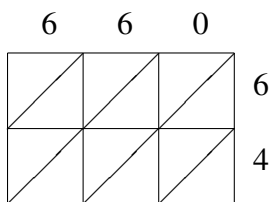
$232 \times 67 = \underline{\hspace{2cm}}$



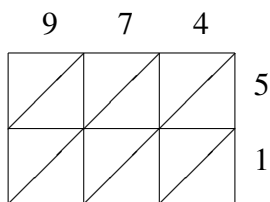
$411 \times 14 = \underline{\hspace{2cm}}$



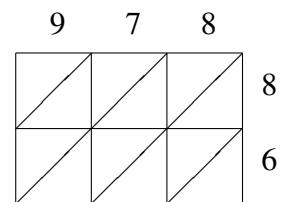
$895 \times 95 = \underline{\hspace{2cm}}$



$660 \times 64 = \underline{\hspace{2cm}}$



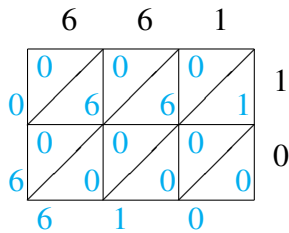
$974 \times 51 = \underline{\hspace{2cm}}$



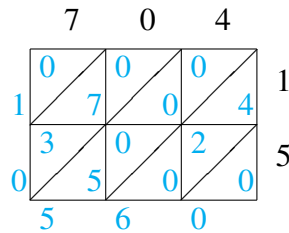
$978 \times 86 = \underline{\hspace{2cm}}$

Lattice Multiplication (D) Answers

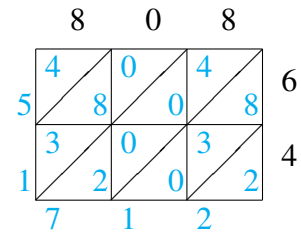
Use lattice multiplication to find each product.



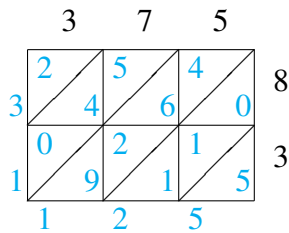
$$661 \times 10 = 6,610$$



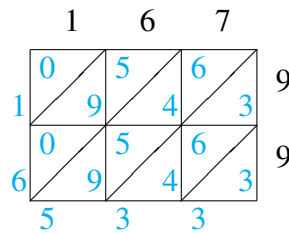
$$704 \times 15 = 10,560$$



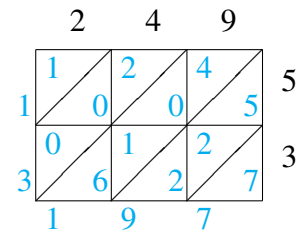
$$808 \times 64 = 51,712$$



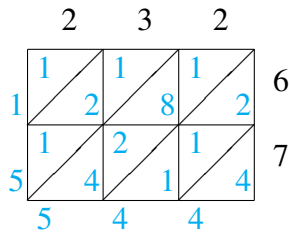
$$375 \times 83 = 31,125$$



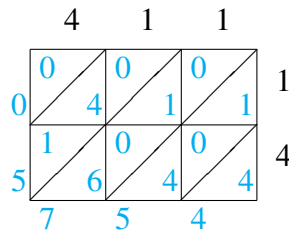
$$167 \times 99 = 16,533$$



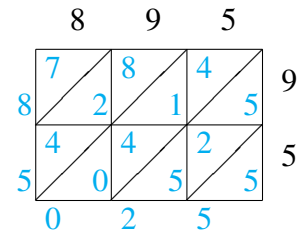
$$249 \times 53 = 13,197$$



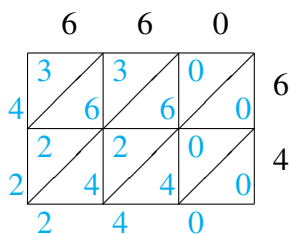
$$232 \times 67 = 15,544$$



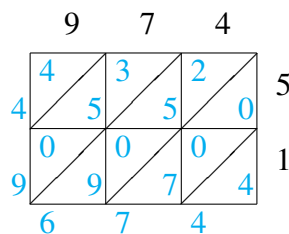
$$411 \times 14 = 5,754$$



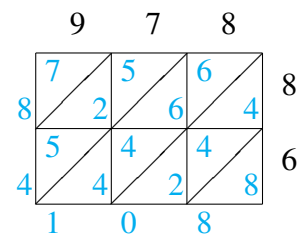
$$895 \times 95 = 85,025$$



$$660 \times 64 = 42,240$$



$$974 \times 51 = 49,674$$



$$978 \times 86 = 84,108$$