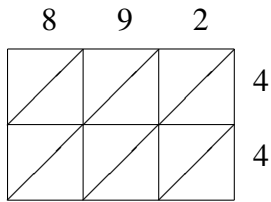
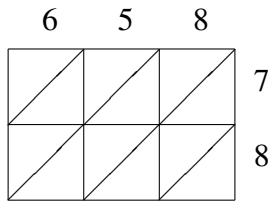


# Lattice Multiplication (E)

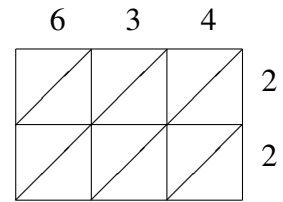
Use lattice multiplication to find each product.



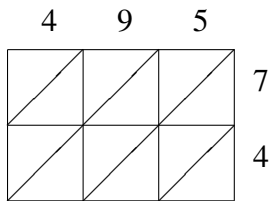
$892 \times 44 = \underline{\hspace{2cm}}$



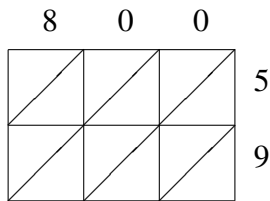
$658 \times 78 = \underline{\hspace{2cm}}$



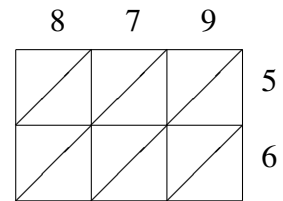
$634 \times 22 = \underline{\hspace{2cm}}$



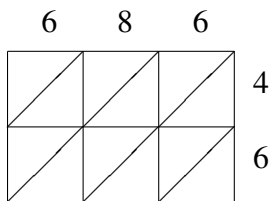
$495 \times 74 = \underline{\hspace{2cm}}$



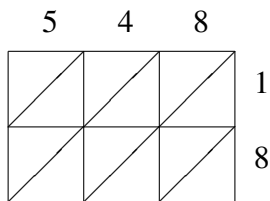
$800 \times 59 = \underline{\hspace{2cm}}$



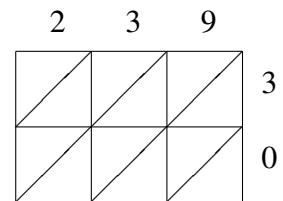
$879 \times 56 = \underline{\hspace{2cm}}$



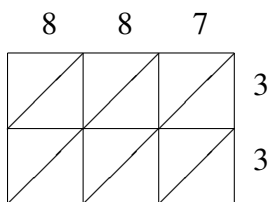
$686 \times 46 = \underline{\hspace{2cm}}$



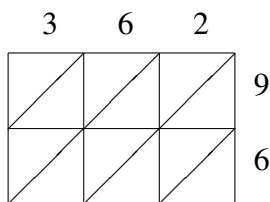
$548 \times 18 = \underline{\hspace{2cm}}$



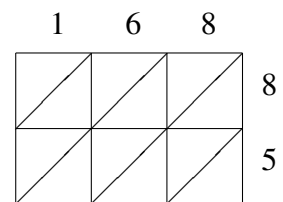
$239 \times 30 = \underline{\hspace{2cm}}$



$887 \times 33 = \underline{\hspace{2cm}}$



$362 \times 96 = \underline{\hspace{2cm}}$



$168 \times 85 = \underline{\hspace{2cm}}$