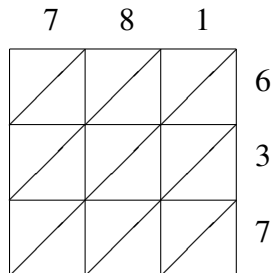
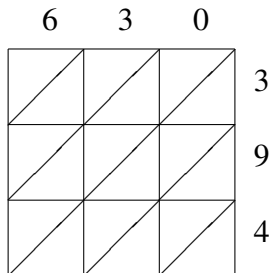


Lattice Multiplication (B)

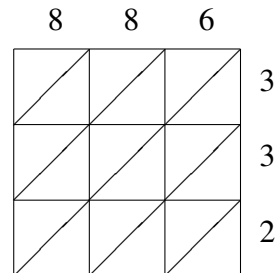
Use lattice multiplication to find each product.



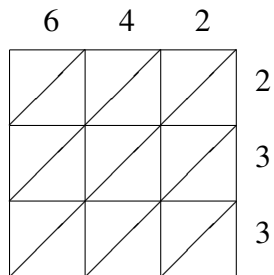
$781 \times 637 = \underline{\hspace{2cm}}$



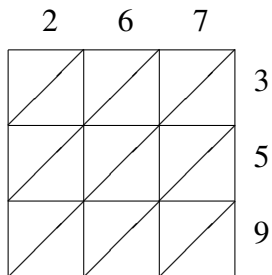
$630 \times 394 = \underline{\hspace{2cm}}$



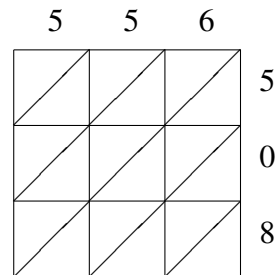
$886 \times 332 = \underline{\hspace{2cm}}$



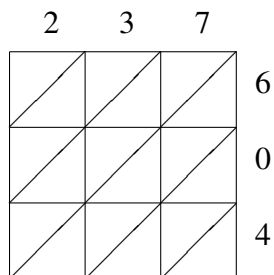
$642 \times 233 = \underline{\hspace{2cm}}$



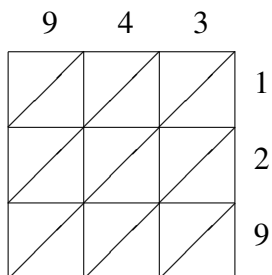
$267 \times 359 = \underline{\hspace{2cm}}$



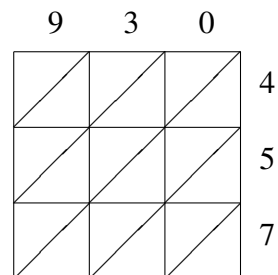
$556 \times 508 = \underline{\hspace{2cm}}$



$237 \times 604 = \underline{\hspace{2cm}}$



$943 \times 129 = \underline{\hspace{2cm}}$



$930 \times 457 = \underline{\hspace{2cm}}$