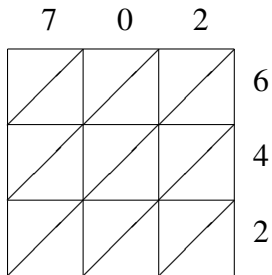
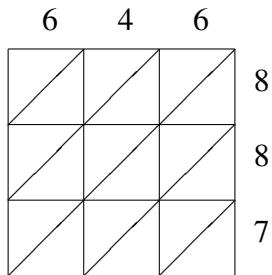


Lattice Multiplication (C)

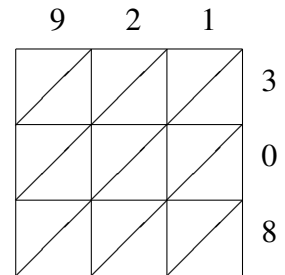
Use lattice multiplication to find each product.



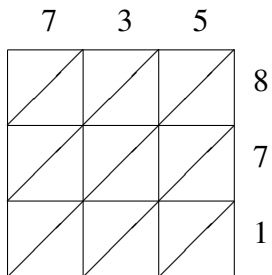
$702 \times 642 = \underline{\hspace{2cm}}$



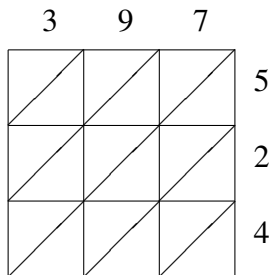
$646 \times 887 = \underline{\hspace{2cm}}$



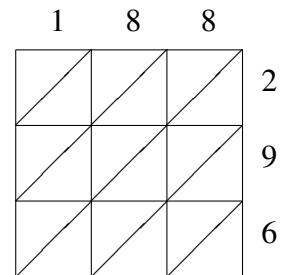
$921 \times 308 = \underline{\hspace{2cm}}$



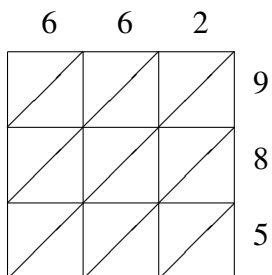
$735 \times 871 = \underline{\hspace{2cm}}$



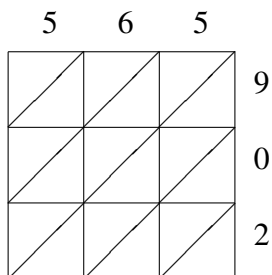
$397 \times 524 = \underline{\hspace{2cm}}$



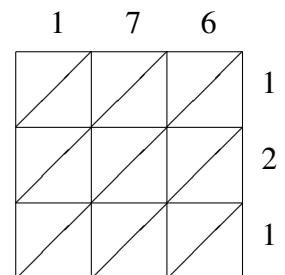
$188 \times 296 = \underline{\hspace{2cm}}$



$662 \times 985 = \underline{\hspace{2cm}}$



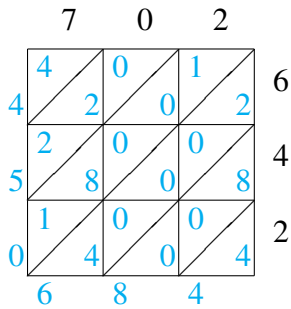
$565 \times 902 = \underline{\hspace{2cm}}$



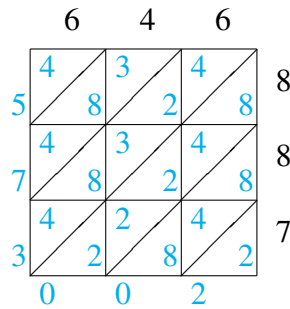
$176 \times 121 = \underline{\hspace{2cm}}$

Lattice Multiplication (C) Answers

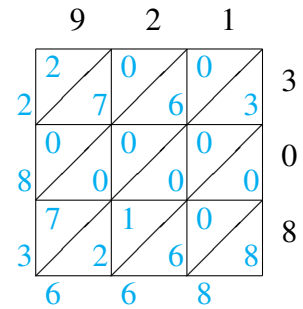
Use lattice multiplication to find each product.



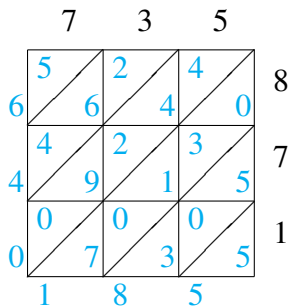
$$702 \times 642 = 450,684$$



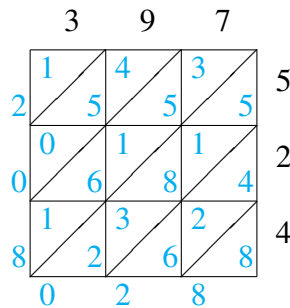
$$646 \times 887 = 573,002$$



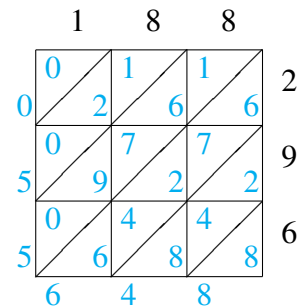
$$921 \times 308 = 283,668$$



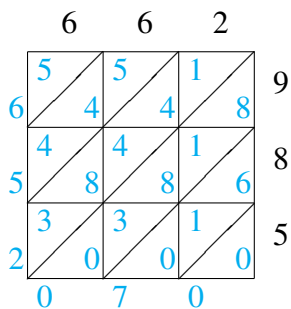
$$735 \times 871 = 640,185$$



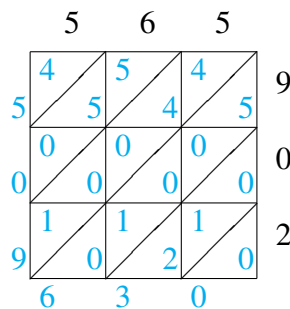
$$397 \times 524 = 208,028$$



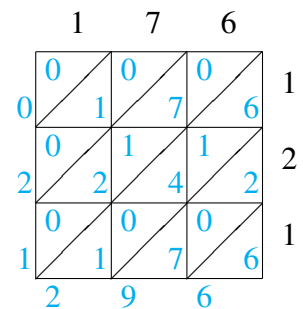
$$188 \times 296 = 55,648$$



$$662 \times 985 = 652,070$$



$$565 \times 902 = 509,630$$



$$176 \times 121 = 21,296$$