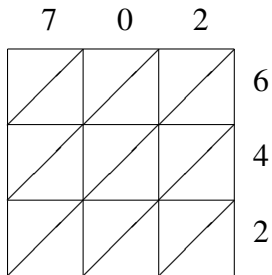
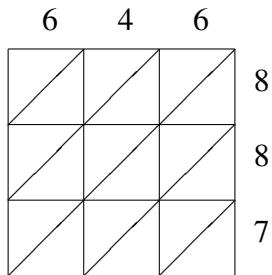


Lattice Multiplication (C)

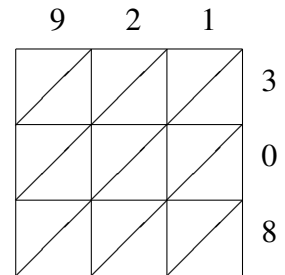
Use lattice multiplication to find each product.



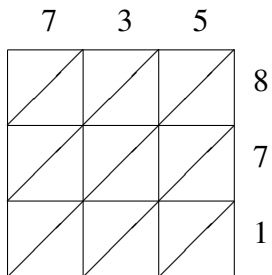
$702 \times 642 = \underline{\hspace{2cm}}$



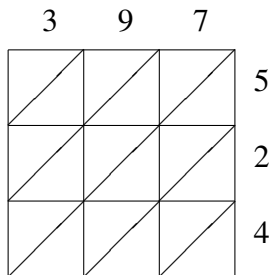
$646 \times 887 = \underline{\hspace{2cm}}$



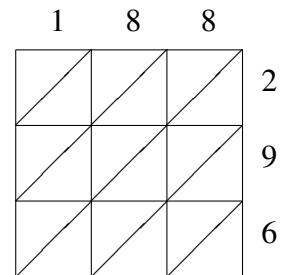
$921 \times 308 = \underline{\hspace{2cm}}$



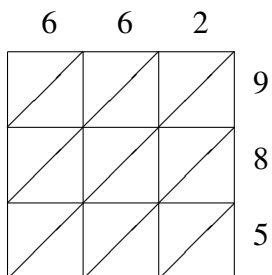
$735 \times 871 = \underline{\hspace{2cm}}$



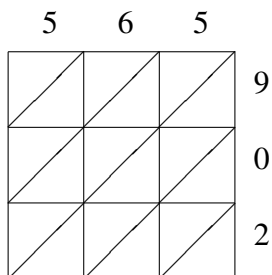
$397 \times 524 = \underline{\hspace{2cm}}$



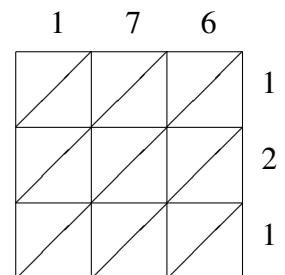
$188 \times 296 = \underline{\hspace{2cm}}$



$662 \times 985 = \underline{\hspace{2cm}}$



$565 \times 902 = \underline{\hspace{2cm}}$



$176 \times 121 = \underline{\hspace{2cm}}$