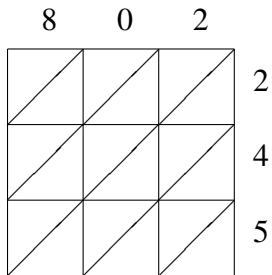
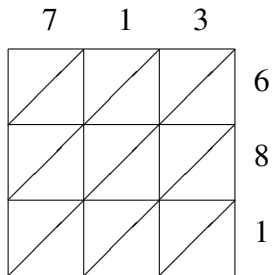


# Lattice Multiplication (E)

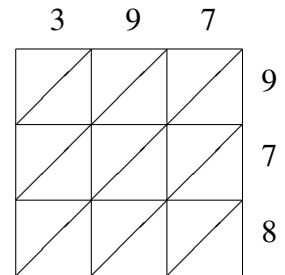
Use lattice multiplication to find each product.



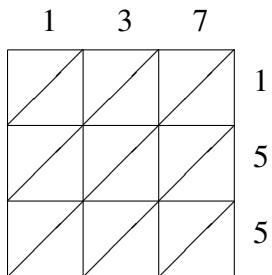
$802 \times 245 = \underline{\hspace{2cm}}$



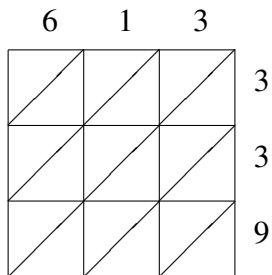
$713 \times 681 = \underline{\hspace{2cm}}$



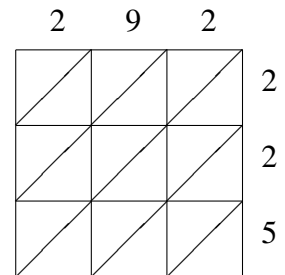
$397 \times 978 = \underline{\hspace{2cm}}$



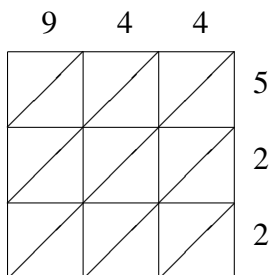
$137 \times 155 = \underline{\hspace{2cm}}$



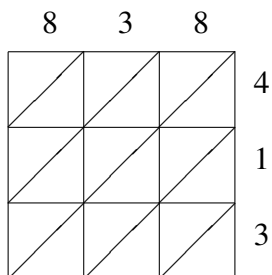
$613 \times 339 = \underline{\hspace{2cm}}$



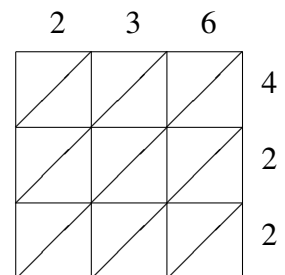
$292 \times 225 = \underline{\hspace{2cm}}$



$944 \times 522 = \underline{\hspace{2cm}}$



$838 \times 413 = \underline{\hspace{2cm}}$



$236 \times 422 = \underline{\hspace{2cm}}$