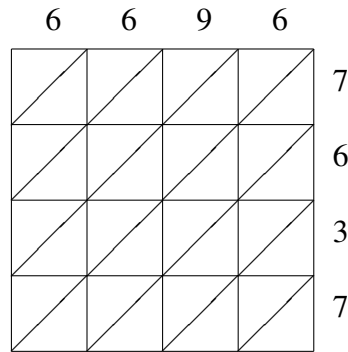
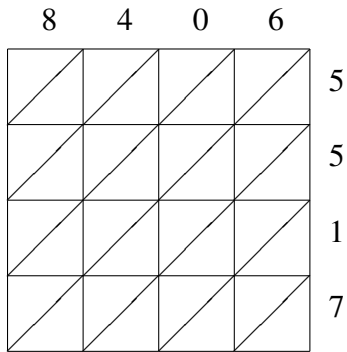


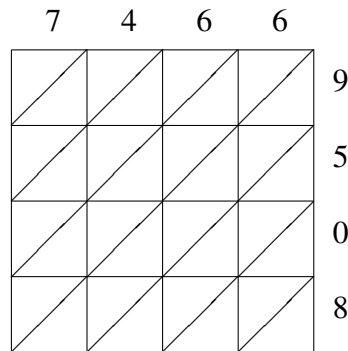
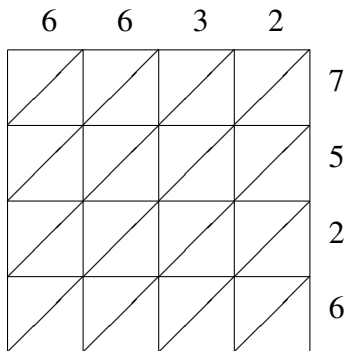
Lattice Multiplication (B)

Use lattice multiplication to find each product.



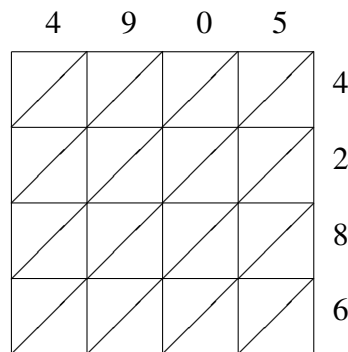
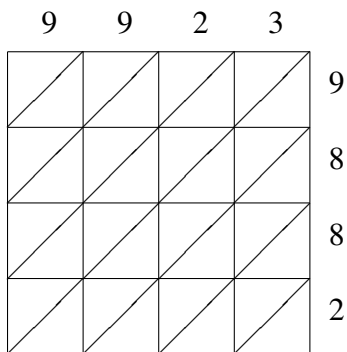
$8406 \times 5517 = \underline{\hspace{2cm}}$

$6696 \times 7637 = \underline{\hspace{2cm}}$



$6632 \times 7526 = \underline{\hspace{2cm}}$

$7466 \times 9508 = \underline{\hspace{2cm}}$

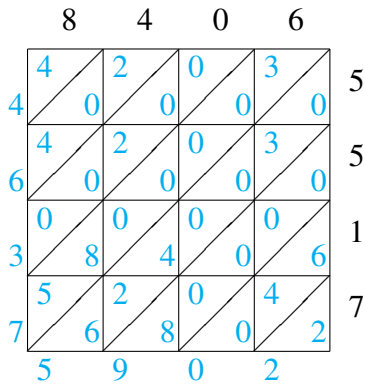


$9923 \times 9882 = \underline{\hspace{2cm}}$

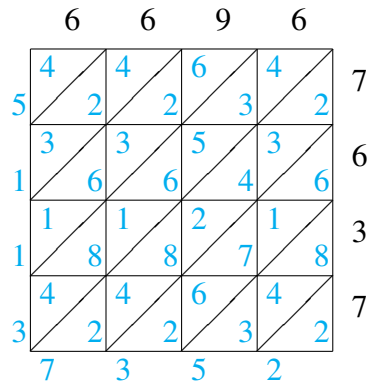
$4905 \times 4286 = \underline{\hspace{2cm}}$

Lattice Multiplication (B) Answers

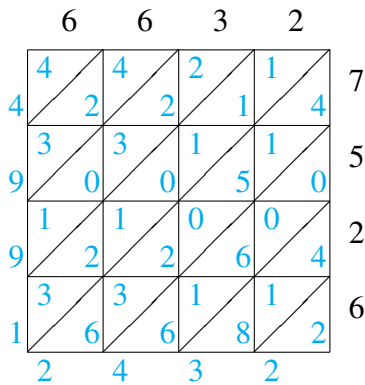
Use lattice multiplication to find each product.



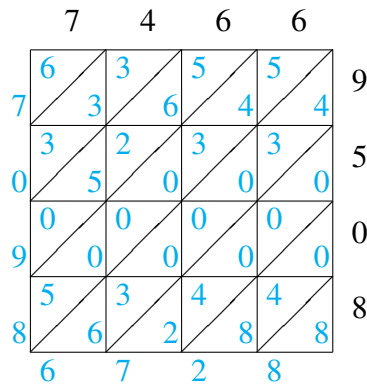
$$8406 \times 5517 = 46,375,902$$



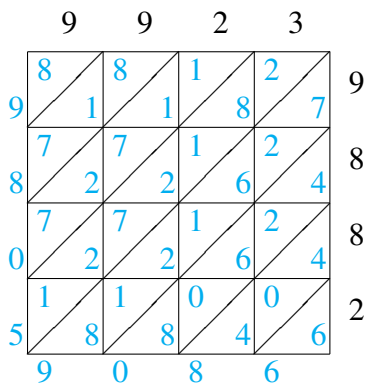
$$6696 \times 7637 = 51,137,352$$



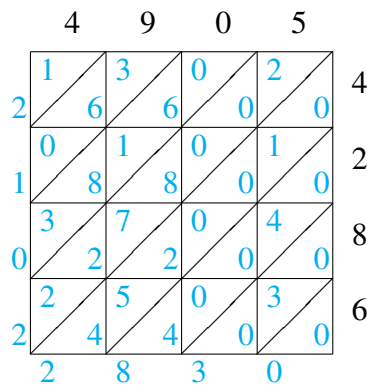
$$6632 \times 7526 = 49,912,432$$



$$7466 \times 9508 = 70,986,728$$



$$9923 \times 9882 = 98,059,086$$



$$4905 \times 4286 = 21,022,830$$