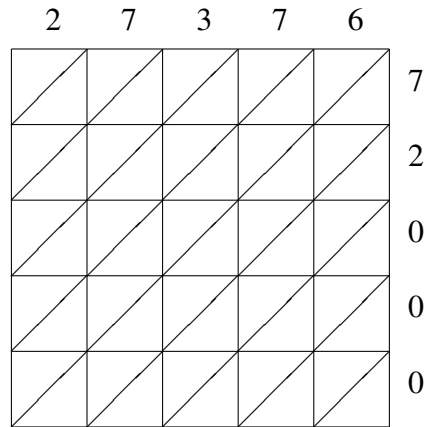
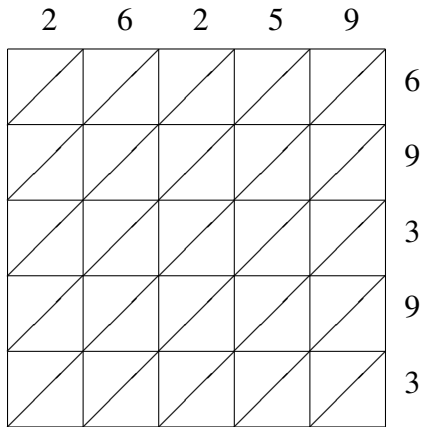


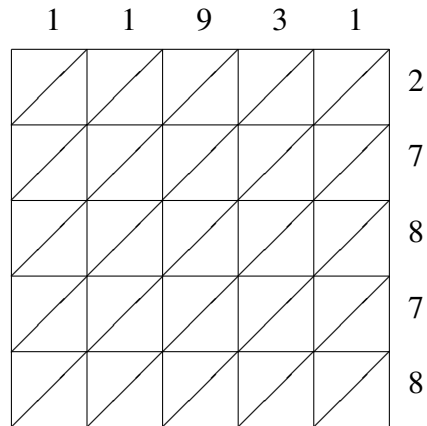
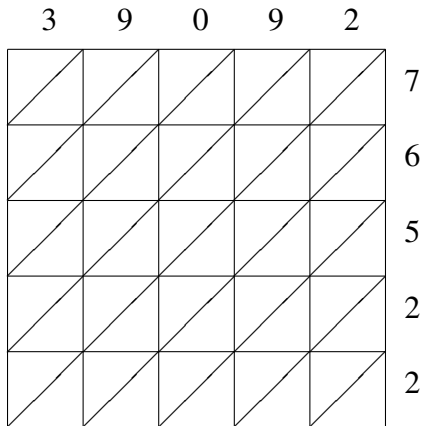
Lattice Multiplication (A)

Use lattice multiplication to find each product.



$26259 \times 69393 = \underline{\hspace{10em}}$

$27376 \times 72000 = \underline{\hspace{10em}}$



$39092 \times 76522 = \underline{\hspace{10em}}$

$11931 \times 27878 = \underline{\hspace{10em}}$