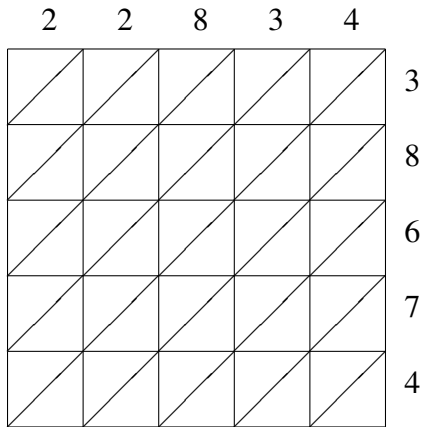
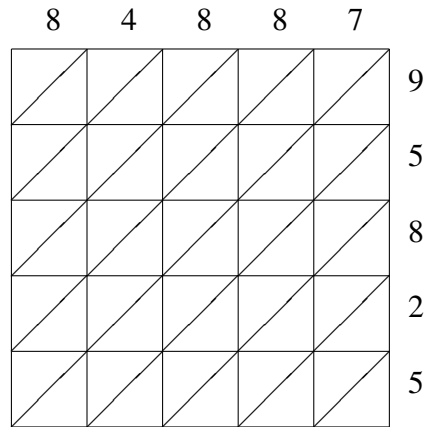


## Lattice Multiplication (D)

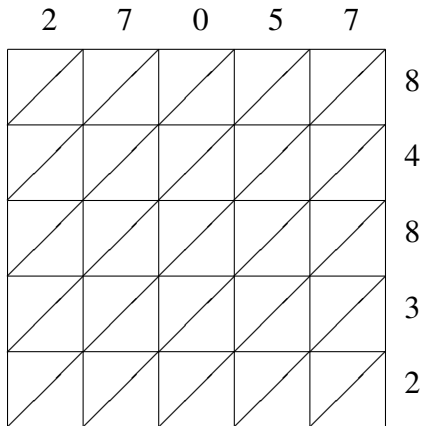
Use lattice multiplication to find each product.



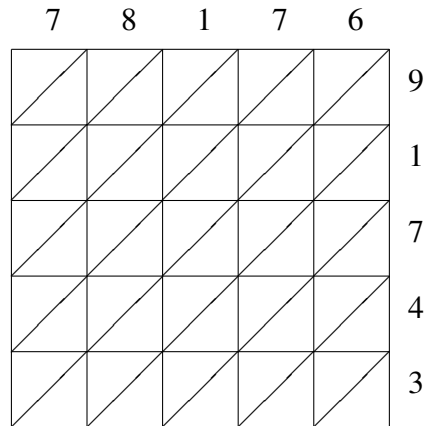
$$22834 \times 38674 = \underline{\hspace{2cm}}$$



$$84887 \times 95825 = \underline{\hspace{2cm}}$$



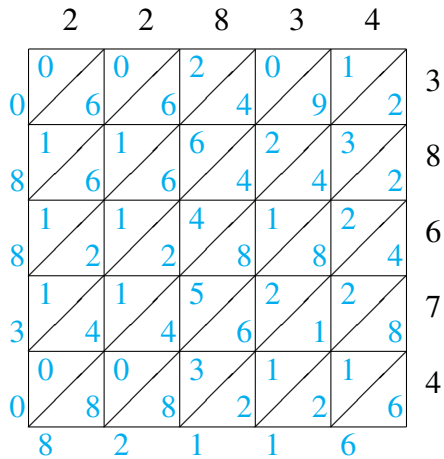
$$27057 \times 84832 = \underline{\hspace{2cm}}$$



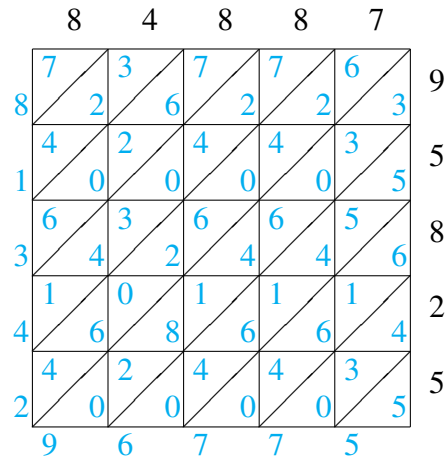
$$78176 \times 91743 = \underline{\hspace{2cm}}$$

# Lattice Multiplication (D) Answers

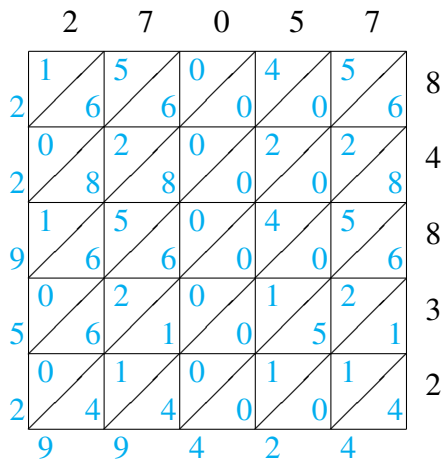
Use lattice multiplication to find each product.



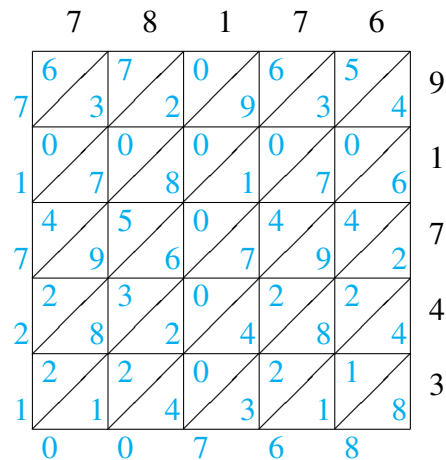
$$22834 \times 38674 = 883,082,116$$



$$84887 \times 95825 = 8,134,296,775$$



$$27057 \times 84832 = 2,295,299,424$$



$$78176 \times 91743 = 7,172,100,768$$